


How to Use the *Mark 2 Navigator's Slide Rule*



Bob Goethe

Copyright © 2016 by TEOG Industries Ltd.



Use scale of minutes with VP-OS plotting

sheet published by Weems & Plath.

TACKLING DOWNWIND

Course to Dest. relative to dead downwind = γ
 Course sailed relative to dead downwind = θ
 Distance Factor $DF = \cos(\gamma) / \cos(\theta)$
 Speed on course $\theta = S\theta$
 Speed Factor $SF = S\theta / S\gamma$
 Time Factor $TF = DF / SF$
 Ideal Course = Course with smallest TF

CHART SCALES AND DISTANCE

Nautical Miles Per Inch = Reciprocal of Chart Scale $\div 72,900$

Inches

GREAT CIRCLE CALCULATIONS

Meridian Angle (H) = $\frac{E}{W}$
 My Latitude (L) = $\frac{N}{S}$
 Latitude of destination (d) = $\frac{N}{S}$

- $\tan(d) \div \cos(H) = \tan(W)$
- Ignore the sign of X (i.e. -60 = 60)
 - If $H < 90^\circ$ then then use [+ W] if d has the same name as L. Use [- W] if d has opposite name as L.
 - If $H > 90^\circ$, use [- W].
- If $X < 90^\circ$, then $X = Y$.
 If $X > 90^\circ$, then $180 - X = Y$
- $[\cos(W) \div \cos(Y)] * \tan(H) = \tan(Az)$
 $Az = \frac{N}{S} \frac{E}{W}$
 Use N if destination is north of you.
 Use E if destination is east of you.
- $\cos(Az) * \tan(Y) = \tan(Hc)$
- $D = (90^\circ - Hc) * 60$

If doing sight reduction, d = declination of celestial object. L = latitude of AP.

If meridian angle $> 90^\circ$ then...
 Use alternate data input: $180^\circ - MA = H$
 Use alternate Step 2: $(90^\circ - L) - W = X$
 Use alternate Step 6: $D = (90^\circ + Hc) * 60$

Actual Size = 11.25" x 2.85"

TABLE OF CONTENTS

Contents

Introduction	1
§1. Abbreviations.....	1
Part I: Navigational Mathematics.....	3
§2. Conversions.....	3
Coastal Navigation	3
§3. Chart Scales & Distance	3
§4. Speed, Time and Distance.....	3
§5. Calculate Boatspeed with a Dutch Log	3
§6. Solving the Current Triangle	3
§7. Fuel Consumption.....	4
§8. Maximum Hull Speed.....	4
§9. Distance to Visible Horizon	4
§10. Calculating Intermediate Tide Heights.....	4
§11. Tacking Downwind.....	4
§12. Distance Off by Two Bearings and the Run Between	5
§13. Distance to Radar Horizon	5
Offshore Navigation	5
§14. Dip.....	5
§15. Dip for Short Horizon	5
§16. Scope of a Given Universal Plotting Sheet.....	6
§17. Sight Reduction/Great Circle Route Calculations	6
§18. Rhumb Line Route Calculation.....	8
§19. Plotting Longitude.....	9
§20. Distance by Vertical Angle of Object Beyond the Horizon.....	9
§21. Compass Delta	9
§22. Trigonometry and Mental Math	10
Part II: Using the Mark 2 Navigator's Slide Rule	11
First Things.....	11
§23. Can You Learn to Navigate From This Manual?	11
§24. Parts of the Slide Rule.....	11
§25. Reading the C & D scales	12
§26. Speed, Time and Distance.....	13
§27. Reading Sines, Cosines and Tangents	15
§28. Solving the Current Triangle	15
Using Gauge Points	18
§29. Converting Liters to Gallons.....	18
§30. Converting Meters to Feet.....	20
§31. Calculate Boatspeed with Dutch Log	21
Multiply and Divide.....	22
§32. Multiply.....	22
§33. Chart Scales & Distance	25
§34. Divide	27
§35. Fuel Consumption.....	29

Squares and Square Roots	31
§36. Distance to Visible Horizon	31
§37. Dip.....	34
§38. Distance by Vertical Angle of Object Beyond the Horizon.....	34
§39. Maximum Hull Speed.....	38
Trigonometry	39
§40. Distance Off by Two Bearings and the Run Between	39
§41. Scope of a Given Universal Plotting Sheet.....	43
§42. Sight Reduction/Great Circle Route Calculations	45
§43. Rhumb Line Route Calculation.....	64
§44. Tacking Downwind.....	70
§45. Compass Delta	76
§46. Trigonometry and Mental Math	80
Visual Methods	82
§47. Calculating Intermediate Tide Heights.....	82
§48. Plotting Longitude.....	86
<i>Index.....</i>	<i>89</i>
<i>Bibliography.....</i>	<i>90</i>
<i>About the Author</i>	<i>91</i>

INTRODUCTION

Part I of this manual outlines some of the formulas used in navigational mathematics that are of particular interest to small boat sailors. It is divided into two groupings: formulas of greatest use in coastal navigation, and formulas used in offshore navigation.

Part II details how these formulas may be solved using the Mark 2 Navigator's Slide Rule. This part is divided by slide rule functions (multiply, divide, squares, trig) so that you can gain facility in using the rule in a step-by-step fashion.

I am deeply obliged to several members of NavList (www.fer3.com/arc) for suggestions both on the design of the rule itself, and for thoughtful editing of this user manual. In particular, Gary LaPook spent a lot of time coaching me regarding Bygrave equations and rhumb line navigation.

Any errors that remain are purely my own.

§1. Abbreviations

Abbreviations used in various parts of this manual include:

AP	assumed position ¹
Az	azimuth angle
D	distance in nautical miles
Dip	Dip is not an abbreviation, but a standard expression in celestial navigation. Expressed in minutes of arc.
DR	Dead reckoning position
GP	geographic position
h	height of eye above water level, in feet
H	height of object (e.g. light of a lighthouse, mountain peak) above water level, in feet
Ho	height observed: height measured by sextant, after corrections for dip and refraction have been applied.
Hr	time in hours
Hs	height measured by sextant, prior to corrections for dip and refraction
S	speed in knots
SOG	speed over the ground, in knots
LOA	length overall
LWL	length of vessel at the waterline, in feet
T	time in minutes

¹ If you are not quite sure what this means, see §23.

VMG velocity made good – the velocity in the direction of your destination. If you are reaching or running, your SOG can be the same as your VMG. If you are tacking, VMG will be less than SOG.

Zn azimuth

γ some angle (pronounced gamma)

Δ a difference in angle or distance (pronounced delta)

θ some angle (pronounced theta)

PART I: NAVIGATIONAL MATHEMATICS

Once you become comfortable with using your slide rule, you may choose to tear out the 4 sheets of paper that comprise Part I, fold them up, and stick them inside your copy of the Nautical Almanac, to give you a concise reminder of things you know how to do.

§2. *Conversions*

1 knot = 1.852 km/hour

1 foot = 0.305 meters

1 nautical mile = 1.852 km

1 US gallon = 3.785 liters

1 fathom = 6 feet = 1.829 meters

The Mark 2 Navigator's Slide Rule has "gauge points" (see §29 and §30) to facilitate the conversion of liters to US gallons, and meters to feet.

Coastal Navigation

§3. *Chart Scales & Distance*

Nautical Miles Per Inch = Reciprocal of Chart Scale \div 72,900

§4. *Speed, Time and Distance*

Work out problems in speed, time, and distance by using the D-scale to read distance on, and the C-scale to read time on.

§5. *Calculate Boatspeed with a Dutch Log*

In the event your knotmeter fails, you can determine your boatspeed by putting the right index over the DL gauge point at .5925. Move the cursor over the C-scale value of the LOA of your boat in feet. Without moving the cursor further, adjust the slide until the number of seconds that passed for a chip of wood to move from the bow to the stern is under the cursor. Read the boatspeed under the index.

§6. *Solving the Current Triangle*

Position the angle of the current off the rhumb line course, measuring 0° to 90° off the bow, or 0° to 90° off the stern, on the S-scale over the top of your boatspeed on the D-scale. Slide the cursor on the D-scale over the value of the drift of the current on the D-scale. Read the compass correction from the S-scale.

Without moving your slide, shift the cursor over to the angle-of-current-off rhumb line minus the correction on the S-scale, if the current is on the bow, or plus the correction if the current is on the quarter. Read the SOG from the D-scale.

§7. *Fuel Consumption*

At 75% of maximum revolutions on your diesel engine:

$$\text{Gallons per Hour} = \text{Horsepower} \times 0.055$$

§8. *Maximum Hull Speed*

For a displacement, non-planing, hull:

$$S = 1.34 \times \sqrt{\text{LWL}}$$

§9. *Distance to Visible Horizon*

$$D = 1.17 \times \sqrt{h}$$

$$D = 2.07 \times \sqrt{\text{height of eye in meters}}$$

§10. *Calculating Intermediate Tide Heights*

Use the quarter-tenth rule to construct a sine curve of the tide heights over time.

§11. *Tacking Downwind*

For given wind/sea conditions, plus sail configuration with your specific hull shape, calculate "distance factor" (DF), "speed factor" (SF) and "time factor" (TF) for each possible course you are considering.

$$DF = \frac{\cos(\gamma)}{\cos(\theta)}$$

$$SF = \frac{S\theta}{S\gamma}$$

$$TF = \frac{DF}{SF}$$

Fill in this table, and select the smallest TF value to determine your ideal course.

Course to Dest. relative to dead downwind γ	Course sailed relative to dead downwind θ	Distance Factor DF $\cos(\gamma)/\cos(\theta)$	Speed on course θ $S\theta$	Speed Factor SF $S\theta/S\gamma$	Time Factor TF DF/SF	Ideal Course
		1.000		1.000	1.000	

§12. *Distance Off by Two Bearings and the Run Between*

$$\frac{\sin(\text{difference between bearing 1 and bearing 2})}{\text{distance run}} = \frac{\sin(\text{bearing 1})}{\text{distance from object when bearing 1 was taken}} = \frac{\sin(\text{bearing 2})}{\text{distance from object when bearing 2 was taken}}$$

§13. *Distance to Radar Horizon*

$$D = 1.22 \times \sqrt{h}$$

...where h is the height of the antenna in feet.

Offshore Navigation

§14. *Dip*

The proper, accepted equation for calculating dip is:

$$\text{Dip} = 0.97 \times \sqrt{h}$$

However, many navigators simply use:

$$\text{Dip} = \sqrt{h}$$

§15. *Dip for Short Horizon*

When taking a sextant sight and finding an island or another vessel lies directly “underneath” the celestial object you are sighting, you must use a “short horizon” calculation for dip if that island/vessel is closer than the natural horizon (see §9). You must know (or estimate) the distance D to the waterline of that island/vessel.

$$\text{Dip}_{\text{Short Horizon}} = (0.416 \times D) + (0.566 \times (\frac{h}{D}))$$

This short-horizon equation may also be used if you are practicing sextant sights on the shore of a lake, as long as you know the distance to the opposing shore.

§16. Scope of a Given Universal Plotting Sheet

Usable latitude range in minutes = $34 \div \sin(\text{Latitude})$

§17. Sight Reduction/Great Circle Route Calculations

Calculating a great circle route and performing sight reduction on a sextant sight are fundamentally both solutions to the navigational triangle.

When doing sight reduction rather than route planning:

- Substitute the coordinates of the GP of your celestial object for the destination, and...
- Omit Step 6 from the following worksheet.

Great Circle Calculations/Sight Reduction

DATA INPUTS: Meridian Angle < 90°	Differences Where Meridian Angle > 90°
Meridian Angle (H) = <input style="width: 30px;" type="text"/> ° <input style="width: 30px;" type="text"/> ' <input style="width: 30px;" type="text"/> E/W	180°-Meridian Angle = (H) = <input style="width: 30px;" type="text"/> ° <input style="width: 30px;" type="text"/> ' <input style="width: 30px;" type="text"/> E/W
My Latitude (L) = <input style="width: 30px;" type="text"/> ° <input style="width: 30px;" type="text"/> ' <input style="width: 30px;" type="text"/> N/S	
Latitude Dest. (d) = <input style="width: 30px;" type="text"/> ° <input style="width: 30px;" type="text"/> ' <input style="width: 30px;" type="text"/> N/S	
1. $\tan(d) \div \cos(H) = \tan(W)$ $W = \text{}^\circ \text{}'$	
2. Ignore the sign of X (i.e. -60 = 60) Use [+ W] if d has the same name as L. Use [- W] if d has opposite name as L. $(90^\circ - L) \pm W = X$ $X = \text{}^\circ \text{}'$	2. $(90^\circ - L) - W = X$ $X = \text{}^\circ \text{}'$
3. If $X < 90^\circ$, then $X = Y$ If $X > 90^\circ$, then $180 - X = Y$ $Y = \text{}^\circ \text{}'$	
4. $[\cos(W) \div \cos(Y)] * \tan(H) = \tan(Az)$ $Az = \text{}^\circ \text{}' \text{}$ N/S E/W Use N if Dest. is N of Your DR Use E if Dest. is E of Your DR	
5. $\cos(Az) * \tan(Y) = \tan(Hc)$ $Hc = \text{}^\circ \text{}'$ $Zn = \text{}^\circ \text{}'$	
6. $(90^\circ - Hc) * 60 = \text{Distance}$ $\begin{array}{r} 89^\circ 60.0' \\ - \text{}^\circ \text{}' \\ \hline \text{}^\circ \text{}' \end{array}$ Convert to decimal degrees. $\begin{array}{r} \text{}^\circ \text{}' \\ \times \quad \underline{60} \\ \hline \end{array}$ $D = \text{} \text{ nm}$	6. $(90^\circ + Hc) * 60 = \text{Distance}$ $\begin{array}{r} 89^\circ 60.0' \\ + \text{}^\circ \text{}' \\ \hline \text{}^\circ \text{}' \end{array}$

§18. Rhumb Line Route Calculation

Rhumb Line Route Calculation

- | | | |
|----|--|-------|
| 1 | Destination latitude | |
| 2 | Destination latitude in decimal degrees | _____ |
| 3 | My latitude | _____ |
| 4 | My latitude in decimal degrees | _____ |
| 5 | Difference between destination latitude and my latitude in decimal degrees (i.e. ΔL) | _____ |
| 6 | Meridian angle between my longitude and destination longitude (i.e. H) | _____ |
| 7 | Convert H into decimal degrees. | _____ |
| 8 | $\pi * H$ in decimal degrees | _____ |
| 9 | (destination latitude in decimal degrees $\div 2$) + 45 | _____ |
| 10 | Convert value from line 9 into degrees and minutes | _____ |
| 11 | Ln of tan(result of line 10) | _____ |
| 12 | (my latitude in decimal degrees $\div 2$) + 45 | _____ |
| 13 | Ln of tan(result of line 12) | _____ |
| 14 | Subtract line 13 from line 11 | _____ |
| 15 | (result of line 14) * 180 | _____ |
| 16 | Divide value from line 8 by value in line 15 | _____ |
| 17 | atan(value of line 16) = Az of course as
___ ° ___ ' ___ (e.g. N 10° 22' W) | _____ |
| | Use N if Dest. is N of Your DR
Use E if Dest. is E of Your DR | _____ |
| 18 | Rhumb line course Zn | _____ |
| 19 | $60 * (\Delta L \text{ from line 5}) \div \cos(\text{Az from line 17}) =$
rhumb line distance in nm | _____ |

§19. *Plotting Longitude*

Using a standard VP-OS plotting sheet,² you may use dividers with the scale printed in the lower right corner. However, you might find it faster to use the scale of 60' to 0' to 60' engraved on the reverse of the Mark 2.

Position the rule along the central latitude line, then rotate the rule from horizontal by an amount equivalent to the latitude of your assumed position.

§20. *Distance by Vertical Angle of Object Beyond the Horizon*

Correct Hs for index error and dip.

Correct for refraction by:

$$\text{Estimated Distance} \div 12.$$

Take this answer, in minutes, and subtract it from the Hs to determine Ho.

Correct for the curvature of the earth by applying this equation to the charted height of the object:

$$h - (D^2 \times 0.9) = h$$

With these corrections, apply the standard equation³ for Distance by Vertical Angle:

$$D = \frac{H \times 0.565}{H_o}$$

If D is significantly different from your estimated D, then repeat the calculations, using the newly derived D as an input for the next iteration.

§21. *Compass Delta*

$$\text{Sin(Azimuth)} = \text{sin(declination)} \div \text{cos(latitude)}$$

² i.e. the VP-OS sheet published by Weems and Plath, or one that uses precisely the same scale.

³ You can certainly use this equation for occasions when you can observe the high water line below the object (WITH corrections for dip and IE, but WITHOUT corrections for refraction or earth curvature). But to be accurate, the object needs to be very close to the shoreline (like a lighthouse). If it is a hilltop or some landmark that is inshore by some distance, then this equation will become progressively more inaccurate. Once I get within 3 nm of shore, there are generally a number of navigational aids visible. I prefer to use magnetic bearings with those aids rather than distance-by-vertical-angle.

If you use the:

- Sun, observe when the lower limb is $\frac{2}{3}$ of the sun's diameter above the visible horizon.
- Moon, observe when the upper limb is right on the visible horizon.
- Star/planet, observe when the object is a little more than a sun diameter above the visible horizon.

§22. *Trigonometry and Mental Math*

Whenever in doubt about which "T" scale to use in reading your answer, convert all your trig functions into numeric values, do your multiplication or division, and get a range for your answer. Then look at the right edge of the various T scales for the short notes that document the value range of each scale.

PART II: USING THE MARK 2 NAVIGATOR'S SLIDE RULE

First Things

§23. *Can You Learn to Navigate From This Manual?*

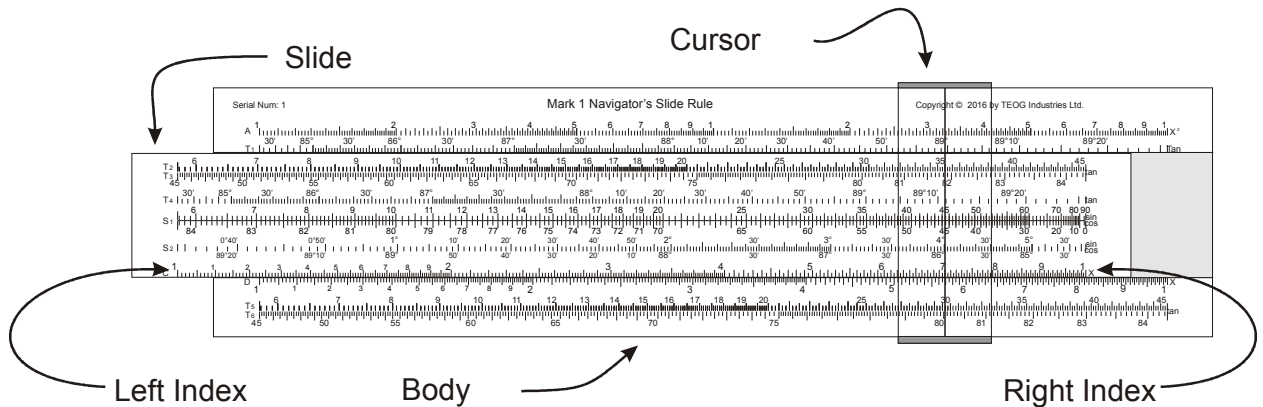
No.

This user manual is intended to orient you to using the Mark 2 slide rule to solve common navigational problems. It assumes that you *already* understand how to navigate, including how to use a sextant to determine your location.

§24. *Parts of the Slide Rule*

The slide rule is made up of three parts:

- Body
- Slide
- Cursor



There are scales of various sorts, labelled with alphabet letters along the left, together with a short description of what the scale does on the right.

The hash mark under the 1 on the left side of the slide is known as the left index. The hash mark under the 1 on the right side is known as the right index.

There are two gauge points marked immediately beneath the D scale. These are to simplify doing common conversions: liters to gallons and meters to feet. See §29 and §30.

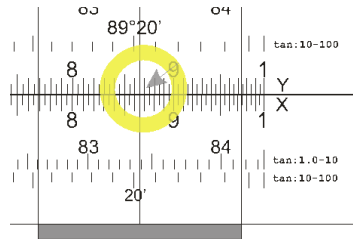
§25. *Reading the C & D scales*

The numbers on the C and D scales range from 1, to 2, to 3, etc...on up to another 1.

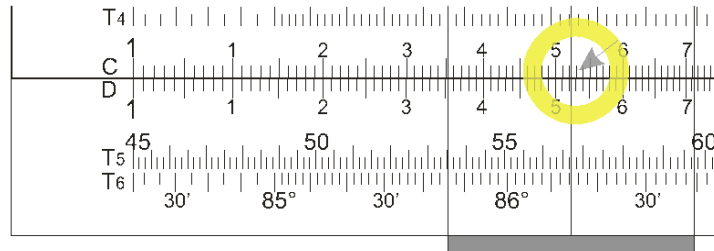
Depending on which part of C or D you are looking at, you can read numbers 3 or 4 digits long.

Another way of saying this is that “You can read answers on a slide rule with up to 3 or 4 significant digits.”

See below for a result on the right hand end of the scale, where numbers are closer together. Here, we can read an answer to three significant digits. The cursor is positioned over 865.



The numbers are further apart on the left hand side of the scale, and we can read results up to 4 significant digits. In this next illustration, the cursor is positioned over 1522.



It is up to you as a user to determine whether a particular sequence means 1.522, 15.22, 152.2, or 1,522. That is, you must work out the position of the decimal place on your own.

If you have never used a slide rule before, working out the decimal places can seem daunting. You must do a certain level of basic calculation in your head so you know roughly how big the number is you are going to arrive.

For instance, if you want to calculate:

$$13.82 \times 11.02$$

...then you know the result is going to be rather more than 10×10 and rather less than 20×20 . That is to say, the answer will be more than 100 and less than 400.

So when you work it out on your slide rule and see that the digits of the answer are 1522, you know you can position the decimal point properly, and that the answer is 152.2.

§26. *Speed, Time and Distance*

If you have done speed, time and distance calculations with an electronic calculator, you have undoubtedly used these three equations, where D = distance in nautical miles, S = speed in knots, and T = time in hours.

$$D = S \times T$$

$$T = D \div S$$

$$S = D \div T$$


But as easy as these are to work, you can solve these sorts of problems even easier with a slide rule by using the C-scale to represent time and the D-scale to represent distance.

Knowing Time and Distance, Solve for Speed

You are sailing from Alexandria, Egypt to Malta, and your boatspeed has been consistently around 6.3 kn. You know there is a counter-clockwise current in the eastern Mediterranean, up the coast of Palestine, around the south coast of Turkey, over to Greece and down to Libya, and back along to Egypt.⁴

You have a steady wind out of the NE, so you can make good your course for Malta...but you expect that you are taking this current right on the nose. What you don't know is just how strong that current is at this time of year. What is your SOG?

You determine that over the first 24 hours of sailing, you have travelled 132 nm. Position 24 over the top of 132 (nautical miles per 24 hours) and look at the right index to read your speed per 1 hour: 5.5 nm. And 5.5 nm in 1 hour = a SOG of 5.5 kn.



You can now infer that the current is setting against you at the rate of 0.8 kn.

Knowing Speed and Distance, Solve for Time

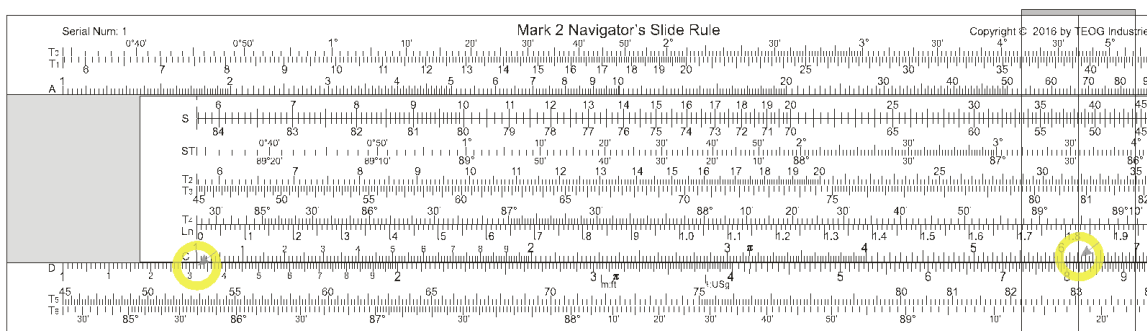
You know that Malta is 819 nm from Alexandria. Assuming you maintain your current speed, how long will it take you to arrive?

⁴ This current is driven by the output from the Nile, and further influenced by wind and weather.

You know you have travelled 132 nm in 1 day. To know how many days it will be before you arrive, set the left index over 132 on the D scale. The index value of 1 represents the time value of 1 day.

You can treat time on the C-scale in terms of hours, days, or minutes. It doesn't matter what unit of time you use...as long as you carry through with those units for your entire calculation. If your time input is in minutes, then your answer needs to also be related to minutes.

Move the cursor over until it is over the top of 819 on the D-scale (representing distance). You can read off the C-scale that if you maintain your current course and speed, you will arrive in 6.2 days, or roughly 6 days and 5 hours.



While you have your slide rule positioned like this, you can project your DR distances from Alexandria on a day by day basis. After 2 days (read on the C-scale), you will have travelled around 264 nm (read on the D-scale). After 3 days, 396 nm. After 4 days, 528 nm. 5 days, 660 nm.

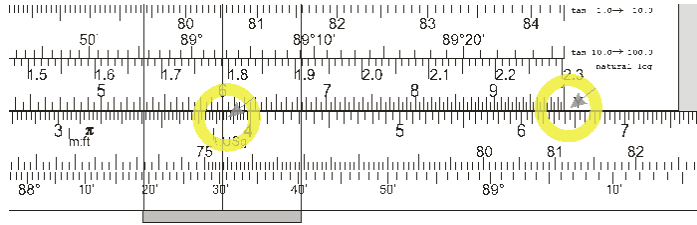
In this particular case, you can work out DR positions with your slide rule much faster than you can with an electronic calculator.

Knowing Speed and Time, Solve for Distance

You have gotten out beyond the peninsula that is Greece, and you have left that head-current behind you. However, the wind has backed through north, to northeast and you find that you have to tack back and forth to make good your course to Malta.

You are on a starboard tack and making 6.4 kn SOG just as you go off-watch. You would like to hold this tack, but you want to stay clear of the Syrtis Shoals off the coast of North Africa. The current watch will be on deck for 6 hours. How far will your vessel travel in 6 hours?

Position the right index over 6.4 on the D-scale, to represent 6.4 knots (i.e. 6.4 nm in 1 hour). Move the cursor over the 6 on the C-scale to see how far you will go in 6 hours: 38.4 nm (read on the D scale).



This brings you within 5 nm of a danger line you have defined for yourself. You know that you will sleep better down below if the vessel never comes closer than 12 nm from your danger line. To determine how long to hold on the current tack to travel 31.4 nm, without moving the slide at all, adjust the cursor across to 31.4 on the D-scale. Read 4.9 hours off the C-scale.

Ask the watch captain to set an alarm for himself, assuming the boatspeed doesn't change too much one way or the other, to ensure that he comes about onto a port tack in 4 hours, 54 minutes.

§27. Reading Sines, Cosines and Tangents

This section is boring. I include it for completeness, but I recommend skipping to the next section to begin *using* your new slide rule. The best way to sort out scales is to learn by doing.

- Sine values from $\sim 6^\circ$ to 90° lie along the top of the S scale.
- Sine values less than $\sim 6^\circ$ lie along the top of the ST scale.
- Cosine values from 0° to $\sim 84^\circ$ lie along the bottom of the S scale.
- Cosine values greater than $\sim 84^\circ$ lie along the bottom of the ST scale.
- On the slide, tangent values from $\sim 6^\circ$ to $\sim 89^\circ$ are on the T_2 , T_3 and T_4 scales. The equivalent of these scales on the body of the rule are found in T_1 , T_5 and T_6 .
- The one wild card relates to tangent values less than $\sim 6^\circ$. On the body, these values are displayed on scale T_0 . But on the slide, to save space, these values lie along the top part of the ST scale. It is possible to combine sine and tangent values for small angles together because, within the limits of slide rule accuracy, the values are identical.

§28. Solving the Current Triangle

I have always enjoyed the story in *The American Practical Navigator* about the 31 year old Nathaniel Bowditch navigating his vessel into fog-bound Salem in 1803, while other

masters were hove-to outside the harbor.⁵ While I would unquestionably use radar and GPS if I were attempting this today, I always aspire to be the *kind* of navigator who would be *capable* of this sort of feat with few or no electronic aids. A fundamental skill here is to be able to solve the current triangle. That is, to determine what compass correction you need to make to cope with a given cross current when your vessel is travelling at a particular speed.

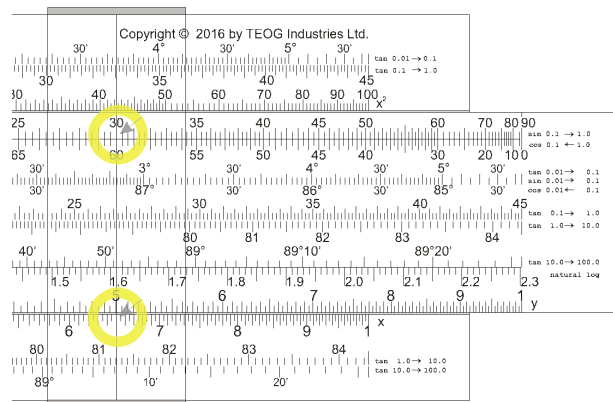
Even with all possible electronic aids, this is still a useful skill to have when trying to, say, cross a 20 mile wide strait and hit a particular pass in the most efficient manner possible. The classic approach to handle this problem is by drawing vector diagrams.

There is a faster way, however. With a slide rule, one can solve a current-triangle problem a good bit more quickly than he can draw such a diagram. And if variable winds mean the boat speeds up or slows down (or if the set and drift of the current varies in a known fashion), he can generate a new heading in seconds without needing to go down to the chart table again.

In this approach, the angle of the current is always measured from the bow, from 0° to 90°, or from the stern, from 0° to 90°. And whatever course correction you make, whether the current is coming from ahead of the beam or abaft, will always be *into* the current.

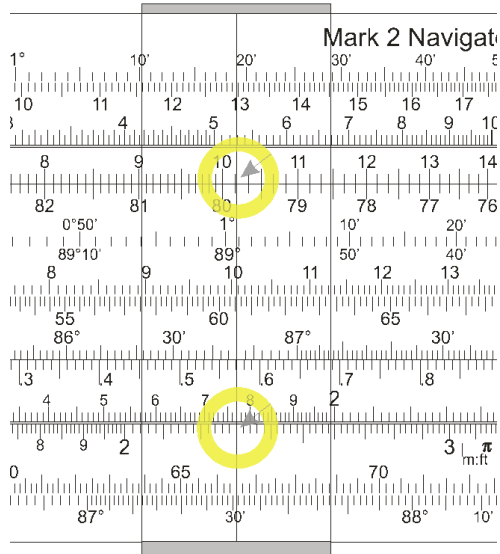
Assuming your boatspeed is 6.5 kn, and your heading is 90°, and the current is on your ahead of the beam, coming in from 120° at 2.3 kn, solve for the correction you need to cope with the current and make good your intended course...and then determine your SOG on that heading.

Set the angle of the current off the bow, 30°, on the S-scale opposite the speed of your vessel, 6.5 kn, on the D-scale.



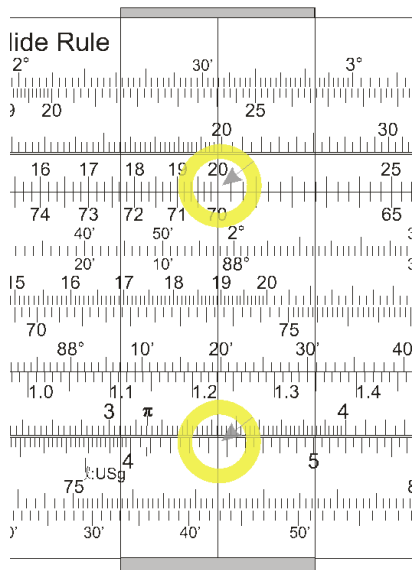
Move the cursor over the speed of the current, 2.3 kn, on the D-Scale. Read the course correction required off the S-scale: 10.2°.

⁵ Bowditch, p. iv.



Since you always make your correction into the current, you will need to steer a course of 100° to make good your intended course of 90° .

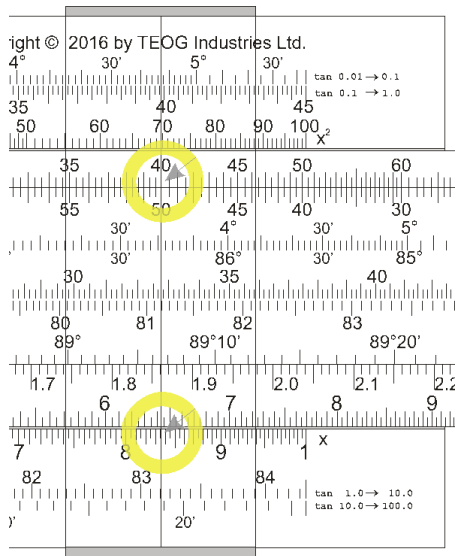
To determine your SOG, subtract the compass correction factor (i.e. 10°) from the angle of the current (i.e. 30°). In this case, without moving the slide of your rule, move the cursor over the top of 20° on the S-scale, and read your SOG on the D-scale: 4.45 kn.



Work this problem again, but assume that the current is setting from 150° ...or 30° off your compass heading, but this time abaft the beam.

The current is still pushing you to port from your intended course. So your compass correction is still to steer 100° to make good your course of 90° . But because the current is abaft the beam instead of ahead of the beam, it will be increasing your SOG rather than decreasing it. So take the 10° compass correction factor and ADD it to the direction of the

current off the rhumb line (i.e. current is 30° off the stern, so add 10° on the S-scale to 30°) and read the SOG off the D-scale. In this case, your SOG would now be 8.35 kn.⁶



Using Gauge Points

§29. *Converting Liters to Gallons*

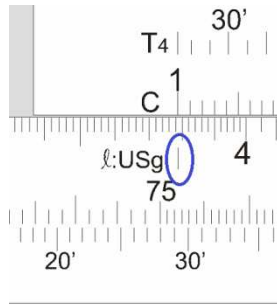
While you normally cruise in United States waters, this summer you are sailing in Canada. You refill with diesel fuel at a marina, and you get 46.5 liters. How many gallons have you taken on?

Position the left index on the slide above the gauge mark labelled ℓ:USg.

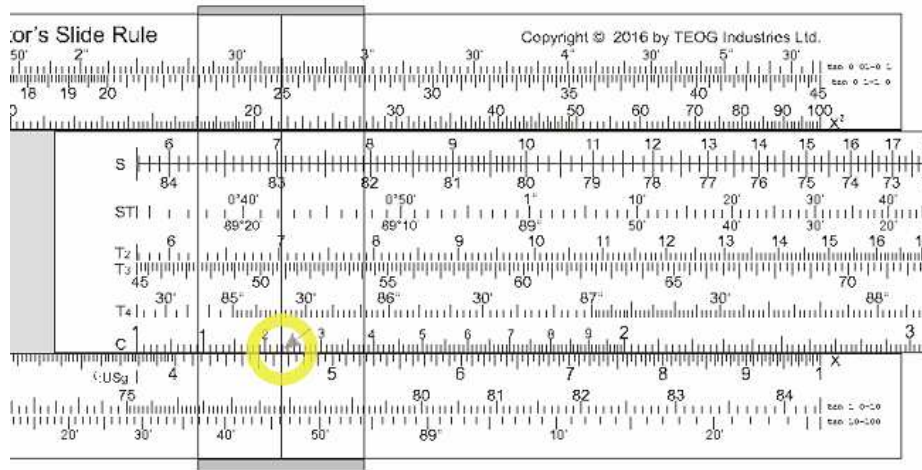
⁶ You can do these calculations on your hand calculator using the equations:

$$\begin{aligned} &(\sin(\text{angle of current to rhumb line}) * \text{drift}) \div \text{boatspeed} = \sin(\text{compass correction}) \\ &(\sin(\text{angle of current to rhumb line} \pm \text{compass correction}) * \text{boatspeed}) \div \sin(\text{angle of current to rhumb line}) = \text{SOG} \end{aligned}$$

...but I find the slide rule method much faster.

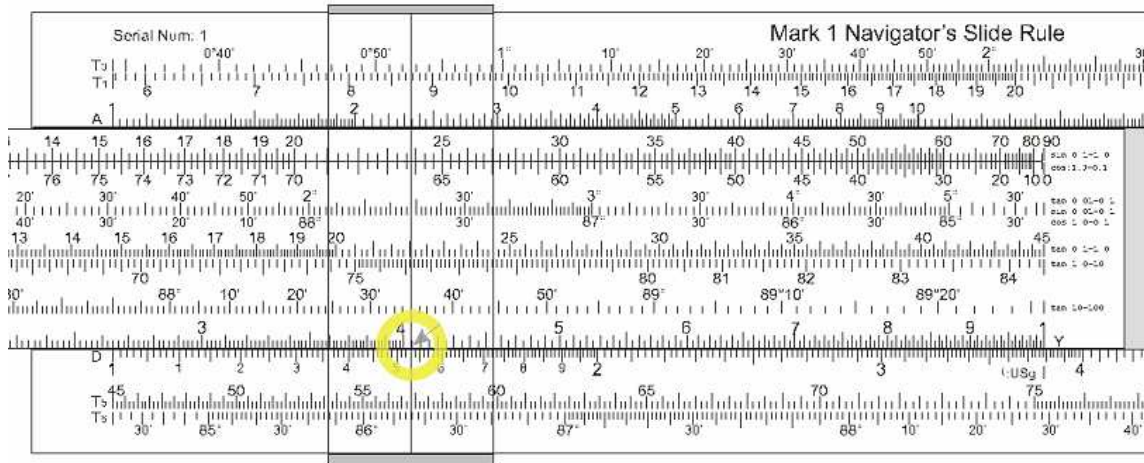


Then slide the cursor over until it is over 46.5 on the D scale. Read the gallons on the C scale: 12.28.



If the digits representing the liters you get are less than 385, such as 153 liters, then slide the right index over the gauge point. And again, slide your cursor over the number of liters on the D scale, and read the gallons on the C scale: 40.4.

You can slide your cursor along any value on the D scale, which now represents liters, and you will get the number of US gallons on the C scale.

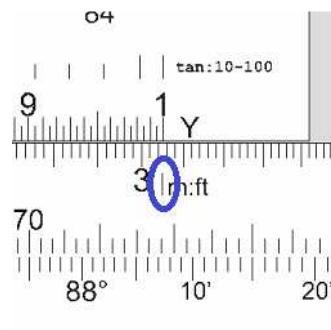


Getting the decimal point right. You know that a gallon amounts to approximately $\frac{1}{4}^{\text{th}}$ of a liter. You know that $\frac{1}{4}^{\text{th}}$ of 100 liters would be 25 gallons. You know that $\frac{1}{4}^{\text{th}}$ of 200 liters would be 50 gallons. So $\frac{1}{4}^{\text{th}}$ of 153 liters will be between 25 and 50. So when you see 404 on the C scale, you know that it has got to be 40.4 (as opposed to 4.04 or 404).

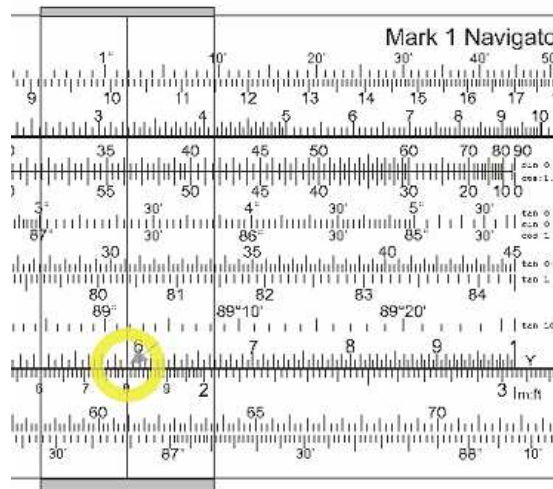
§30. *Converting Meters to Feet*

As you continue your cruise in Canada, you want to convert the depths you see on the chart – which are in meters – into feet. You see on the chart you are in 18 meters of water. What is the depth in feet?

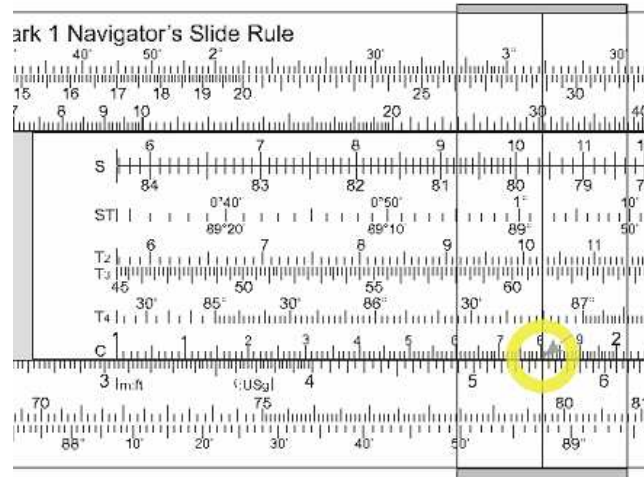
Move the right index over the gauge mark labelled “m:ft”.



Move the cursor over the top of 18 on the D scale, and read the answer off the C scale: 59 feet.



If the initial numbers in the meters you want to convert are greater than 305, then slide the left index over the m:ft gauge point. So for instance, to convert 5.5 meters into feet, your slide rule will look like this:



5.5 meters on the D scale equate to 18 feet on the C scale.

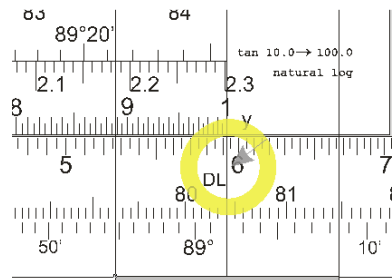
Getting the decimal point right. You know that there are approximately 3 feet in every meter. If you were interested in 5 meters rather than 5.5 meters, the answer would be in the neighborhood of $3 \times 5 = 15$. So when you see 18 as the first two significant digits in your answer you know that the answer is not 1.8 feet, nor is it 180 feet. The answer has got to be 18 feet.

§31. *Calculate Boatspeed with Dutch Log*

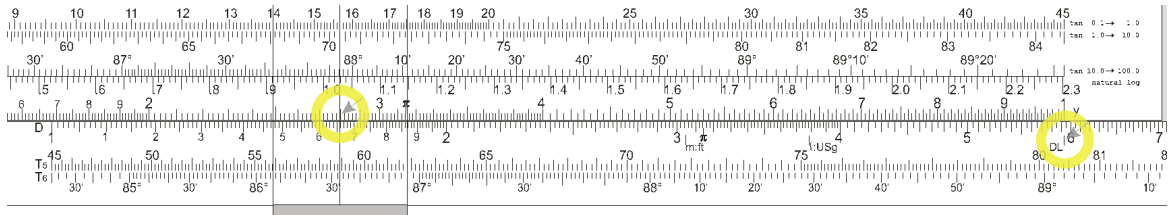
Probably once or twice out of every five times I charter a vessel, the knotmeter either stops working during the cruise, or never works at all. To do any sort of careful navigation, you need to know your boatspeed. One way of discovering this is with a Dutch (or Dutchman's) log.

Throw a piece of wood forward from the bow, and count the number of seconds that pass from the moment it comes even with the bow to the moment it comes even with the stern.

Position the right index over the gauge point at .5925 on the D-scale, marked by a "DL" (for "Dutch Log").

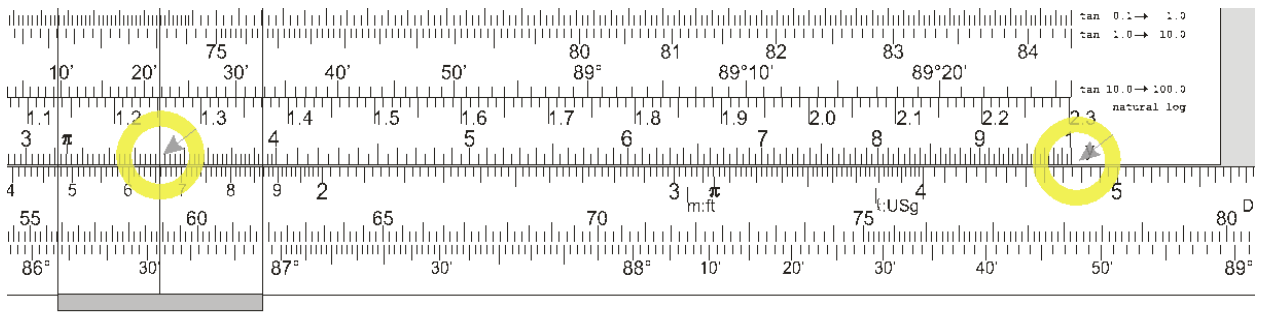


Slide the cursor out over the C-scale until it is over the top of a number that represents the LOA in feet. In this example, we will assume we are on a 28 foot boat.



Leave the cursor where it is, and slide the C-scale over until the number of seconds that passed for your wood (or other biodegradable object) to traverse the length of your boat is under the cursor. For this example, we will assume that it took 3.5 seconds for the chip of wood to travel the 28 feet length of your vessel.

Read the speed from the D-scale beneath the index.



In this example, the boatspeed would be ~4.8 knots.

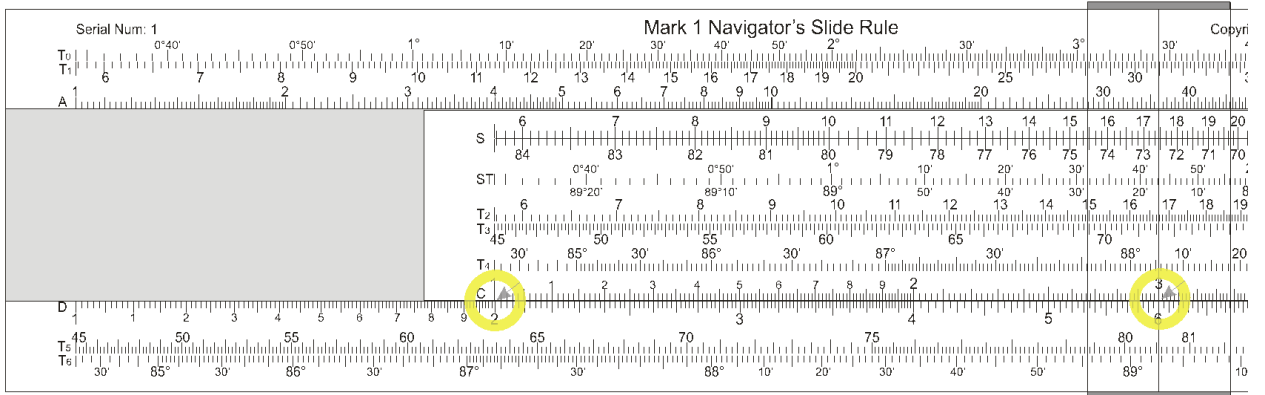
Of course, you scan the surface for seaweed or debris and use that for timing rather than a piece of wood or other object that you throw in the water.

Multiply and Divide


§32. Multiply

To multiply, position the left index over your first number on the D scale. Move the cursor along until it is over the second number on the C scale. The answer will be under the cursor on the D scale.

Multiply 2×3 . Answer = 6



Multiply 3.14×290 Answer = 911

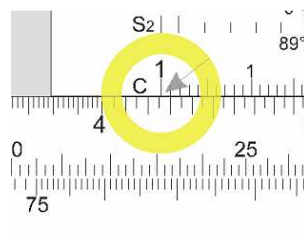


Sorting out the decimal place. You know that $3 \times 300 = 900$, so you know that your answer is in the neighborhood of 900. You know your answer is not 9.11. Nor is it in the neighborhood of 91.1.

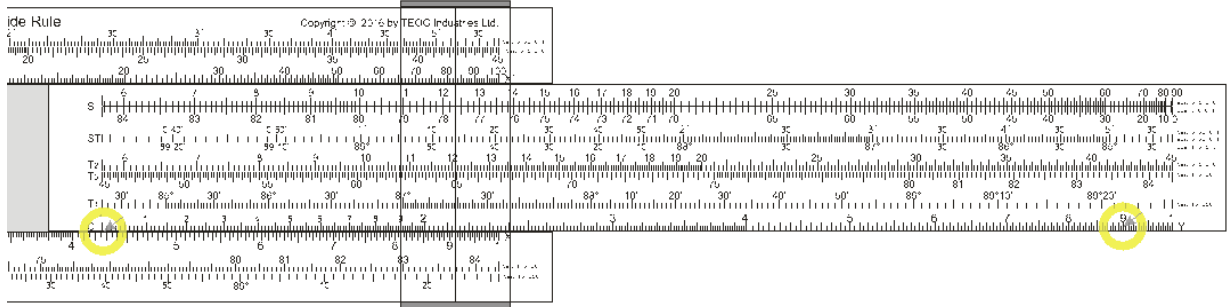
So when you see 911 on the slide rule, you know to position the decimal point at the end. Hence, 911.

Multiply $4,262 \times 898$

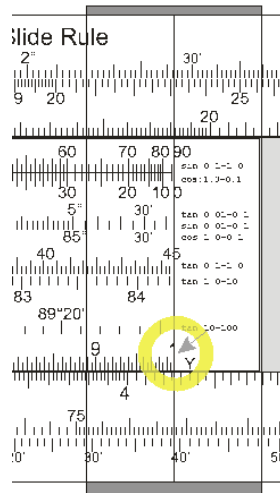
Position the left index over 426. The slide rule is only capable of 3 significant digits here, so you cannot come any closer to your number than 426.



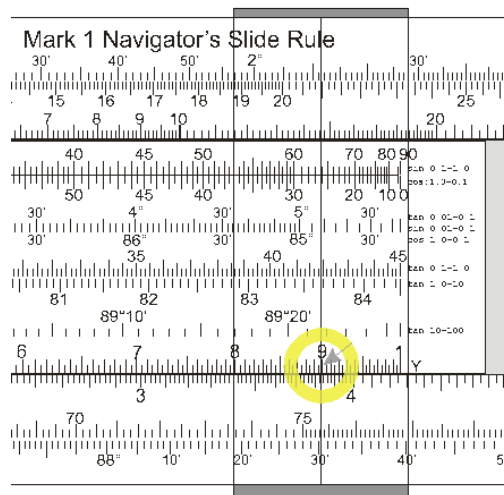
As you look at this, however, you see that you cannot slide the cursor over the top of 898. It extends beyond the right index on the D scale.



When this happens, use the other index on the C scale. That is, move the right index over the top of 426 on the D scale. Then slide the cursor over the top of 898 on the C scale.



The answer is 382.



Sorting out the decimal place. You dig back into your memories of learning to multiply big numbers in grade 5. In your head, you do this.

$$\begin{array}{r} 4,000 \\ \times \quad \underline{1,000} \\ \hline 4,000,000 \end{array}$$

So you know your answer is somewhere in the neighborhood of 4 million. Since your slide rule says 382, you know your answer has to be 3,820,000.

When you work out this problem using the calculator on your smartphone, you get an answer of 3,827,276. But when you work this on your Mark 2, using 3 significant digits (a.k.a. slide rule accuracy), you get 3,820,000.

§33. *Chart Scales & Distance*

You charter a Beneteau 35 for that dream-sailing-vacation in the Caribbean. Because it is a charter boat, you are not quite sure what kind of navigation instruments you will find aboard. So you bring along your own parallel rule, dividers, binoculars and hand-bearing compass.

And then as you are going through airport security, your dividers are confiscated,⁷ and when you get to your destination, you discover that indeed the on-board dividers are a total P.O.S. But no fear, you can calculate distances using the scale of inches on your Mark 2 Navigator's Slide Rule. Besides, this will give you an opportunity to practice basic multiplication on your slide rule.

Nautical Miles Per Inch = Reciprocal of Chart Scale ÷ 72,900

So then, if your chart scale is 1:50,000, you would do this:

$$\text{nm/inch} = 50,000 \div 72,900 = 0.686 \text{ nm/inch}$$

Position the cursor over 50,000 on the D scale, and center 729000 from the C scale under the cursor. Read the result under the right index of the C scale.

⁷ ...because, you know, navigational instruments are so dangerous. My white-haired, 85 year old mother even had her cuticle scissors seized by an airport security person.

But I came to realize that this was only prudent, since my mom *could* have been a member of Al-Oughtrêd, a ruthless terrorist organization comprised of German grandmothers from Pennsylvania and Norwegian grandmothers from Minnesota. They have been known to break through the armored door to the cockpit with no more than fingernail clippers, forcing the pilots to land in Somalia.

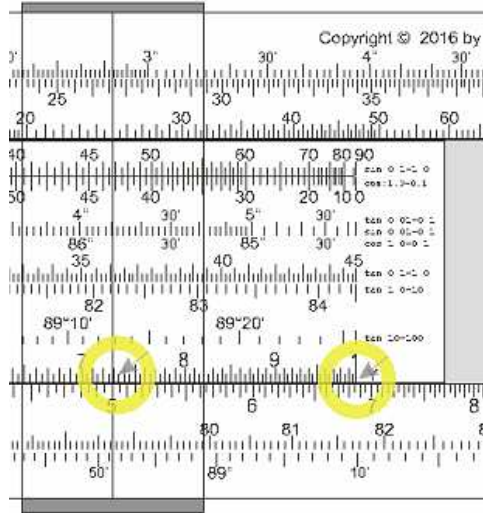
In 2014, Al-Oughtrêd began actively recruiting younger members from the ranks of the American Association of Retired People (AARP). So if you are a navigator over 50 with dividers in your carry on luggage, you are liable to be profiled as a terrorist. If you have an AARP membership card, prepare for a strip search.

Oughtrêdis are so feared by jihadists that just the mention of the *name* "Al-Oughtrêd" can make members of Al-Qaeda and Al-Shabaab pee in their pants. And the possibility of actually *meeting* an Oughtrêdi is terrifying enough that members of ISIS will leave skid marks on their white robes.

In fact, it was a chance encounter with a French grandmother from Vermont at a Libyan training camp that led to an "incident" with an entire group of 87 ISIS members at once. To make matters worse, there was a CNN cameraman present and the images went viral.

It was this embarrassment that led to the current fashion of ISIS members wearing black garments. Much, much scarier if you can't see the brown stains.





Sorting out the decimal place. You know from looking at the slide rule that the significant digits of the answer are 686. But you still need to sort out whether the answer is 0.686, 6.86, or 68.6. Just looking at $50,000 \div 72,900$, it is not instantly obvious how to position the decimal place.

It is in the nature of division that you get the same answer if you strike off digits equally from the end of the numbers concerned. Hence,

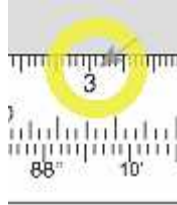
$\frac{50,000}{72,900}$ will yield the same answer as $\frac{50,000}{72,900}$ (or rather $\frac{500}{729}$) which will be the same answer as $\frac{5}{7.29}$.

You know that $5 \div 10 = 0.5$, and that $5 \div 5 = 1$, so the answer to $5 \div 7.29$ will be somewhere between 0.5 and 1.0. Hence, you know that the decimal point should be 0.686 nm per inch.

So then, if you are trying to sort out the scale of a chart that is 1:500,000, then you can use the same approach to know that the answer will be 6.86 nm per inch.

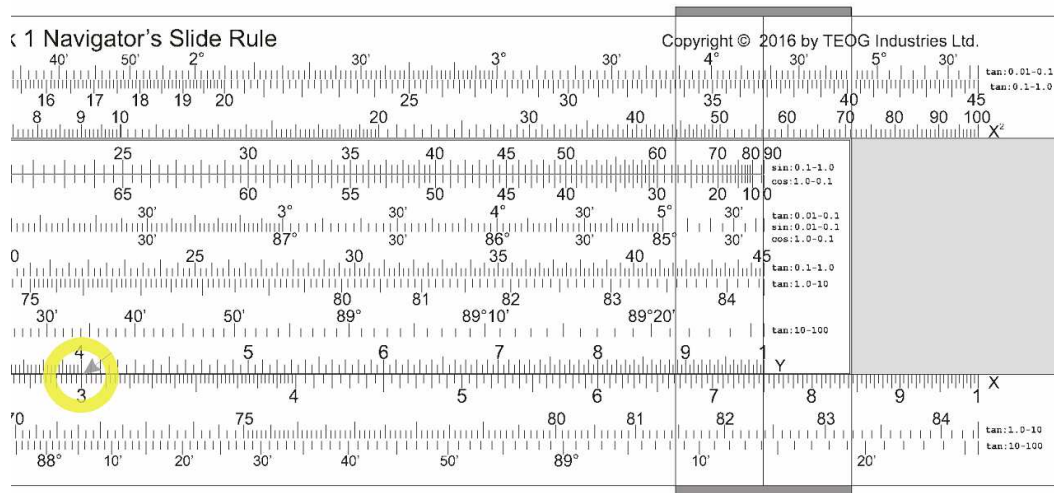
§34. Divide

To figure out $\frac{3}{4}$ on the slide rule, I find it easy if I verbalize it as “3 divided by 4”. In this case, I start by positioning the cursor over the top of the 3 on the D scale.



Then I position the 4 from the C scale over the top of the 3 on the D scale.

Then I slide my cursor over so it is over whichever index on the slide is still over a number on the body and read the answer on the D scale. In this case, the answer is 0.75.



Sorting out the decimal place. As with multiplication, you are going to need to do some rough mental math to sort out whether the answer is 750, 7.5, or 0.75.

You are already getting the picture that using a slide rule is going to force you to start doing some rough, order-of-magnitude calculations in your head. This makes using a slide rule harder than using an electronic calculator, to be sure.

But on the plus side, using a slide rule “cultivates in the user an intuition for numerical relationships and scale that people who have used only digital calculators often lack.”⁸

The classic example of a failure to *think* about the numbers you are getting from your digital calculation device (be it a \$5 hand-held calculator, or a multi-million-dollar computer) is the crash of the Mars Climate Orbiter in 1999.⁹

⁸ https://en.wikipedia.org/wiki/Slide_rule, retrieved 03 March 2016.

⁹ The California scientists with NASA were all using metric units in their calculations, while the propulsion engineers in Colorado were all using US-customary (foot-pound) measurements in theirs. Nobody noticed that the navigational software in the spacecraft was confused until it was too late.

Had they had just one engineer with well-developed numerical intuition say, “Wait a second. These numbers don’t look right”, and then convinced others to take him seriously, they could have saved the \$327 million that went up in smoke as the spacecraft was incinerated in the Martian atmosphere.

§35. *Fuel Consumption*

Diesel engines consume about 1 gallon of fuel per hour for every 18 horsepower used when the engine is run at 75% of its maximum RPM.

Another way of expressing this is to say that you can estimate the gallons of diesel fuel consumed by multiplying horsepower by 0.055.

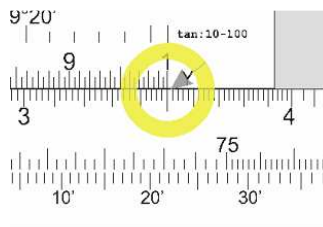
$$\text{Gallons per Hour} = \text{Horsepower} \times 0.055$$

How much fuel will a 35 hp diesel consume while running 20 hours at 75% of maximum RPM?

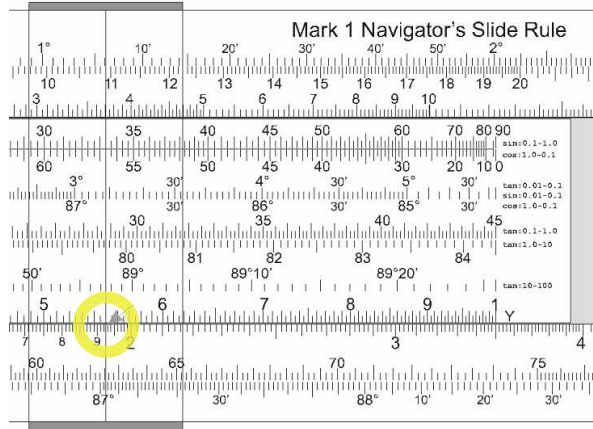
$$\text{GPH} = 35 \times 0.055$$

$$\text{Gallons consumed} = 1.926 \text{ GPH} \times 20 \text{ hours}$$

Position the right index on the C scale over 35 on the D scale.




Slide the cursor over to 0.055 on the C scale. Read the answer of 1.926 gallons per hour on the D scale.



Sorting out the decimal place. You know that 0.055 is about ½ of 0.1. You can easily figure out that 35 × 0.1 is 3.5, and half of that is around 1.5 and change. So when you see an answer of 1926, you know that the answer is near 1.5, hence 1.926.

Finishing up: Move the left index over so it lines up underneath the cursor at 1.926.



You can read the answer as 38.6 gallons.

Sorting out the decimal place. You know that you boat is burning approximately 2 gallons per hour. If you run for 20 hours, you know you are going to burn in the neighborhood of 40 gallons. So when you see an answer of 386, you know immediately that the answer is neither 3.86, nor 386.0, but rather 38.6

There is another equation that plays a role in ship operations: $cS^3 = Cs^3$, to describe how much fuel you WOULD consume (C) at a new speed (S) if you know how much fuel you DO consume now (c) at your current speed (s).

That is to say, if you are consuming 38.6 gallons of diesel to get to your destination at 6 knots, how much would you consume if you kicked your speed up to 9 knots?

This is a useful equation with larger cargo vessels, who can increase their speed by 50%, e.g. from 12 knots to 18 knots, without approaching their hull speed (See §39).

It is pretty common for a 40 foot cruising sailboat to motor at 6 knots. But increasing that speed by 50% is usually out of the question, since such a vessel might have a hull speed of 8.2 knots. If you had a big enough engine, you COULD push that 40' yacht at 9 knots, but the amount of fuel you would consume would go far beyond what you would expect from $cS^3 = Cs^3$.

Squares and Square Roots

§36. *Distance to Visible Horizon*

It feels like the earth is this vast, table-flat surface that stretches away from us into infinity. But in reality, the earth's surface is curving away from us at a dramatic rate. If your eye is 6 feet above water level, your actual horizon is only 2.87 nm away.

You may be seeing trees or buildings along the shoreline that are further away than 2.87 nm, of course...but you are not seeing the point where those trees/buildings actually meet the waterline. That point is over the horizon from you. The equations that allow you to calculate this are (in feet to the left, and meters to the right):

$$D = 1.17 \times \sqrt{h}$$

$$D = 2.07 \times \sqrt{\text{height of eye in meters}}$$

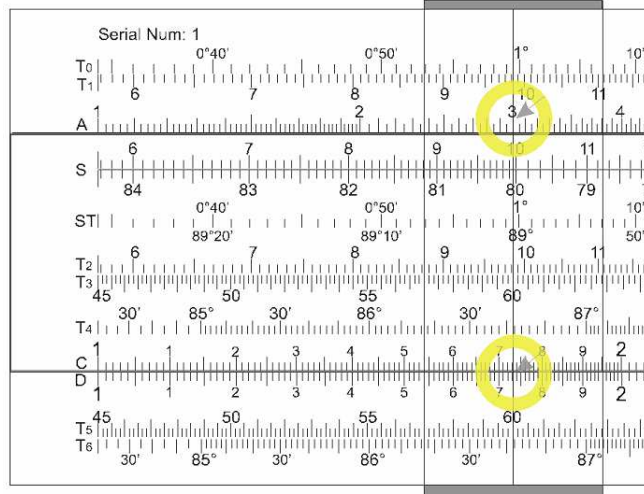
When I first got my sextant, in the early 1980s, I was living in Japan and sailing my 13' dinghy on Beppu Bay, on the NE coast of Kyushu Island.

I used the equation above to sort out that if my eye was 3' above the waterline, which is was when I sat in the bottom of the cockpit, the horizon was only 2.0 nm away. As long as I could get 2 miles offshore (easy to verify by the other navigational aids that were available) I could take sextant sights that would be as valid as if I were 1,000 miles offshore.

So, to calculate the distance to the horizon, with an eye height of 3', using a slide rule, you will use the A scale like this.



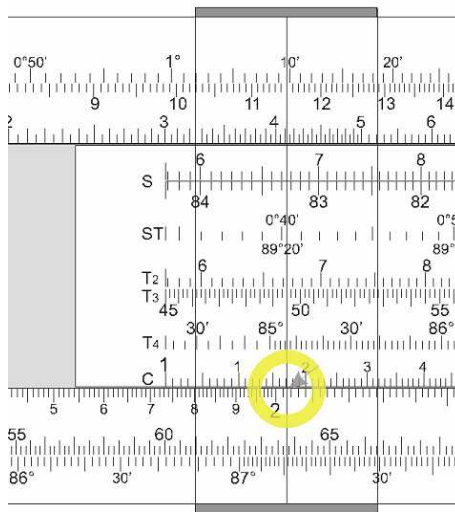
Position your cursor over 3 on the A scale. Once you have done this, you can read off the square root of 3 on the D scale on the body.



The square root of 3 is 1.732...though with slide rule accuracy, you may find that last digit is a little different.

One now needs to multiply this by 1.17. So move the left index so it is directly beneath the cursor.

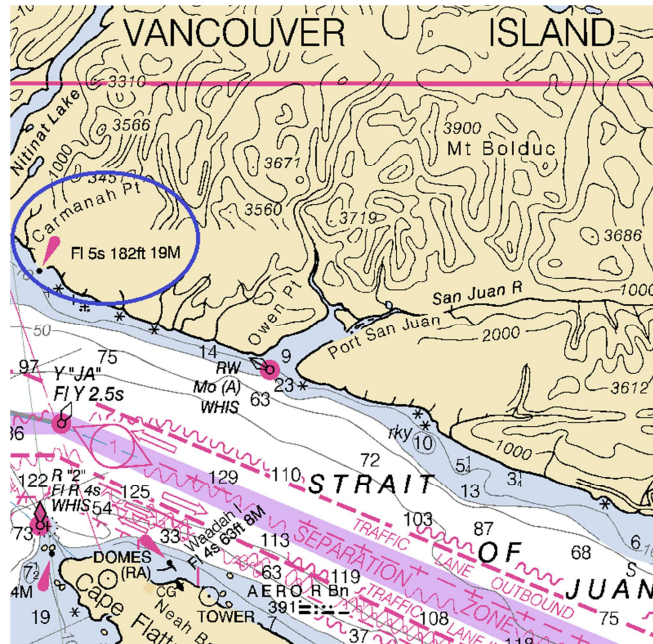
Now slide the cursor over to 1.17 on the C scale, and read the answer off the D scale: 2.025 nm.



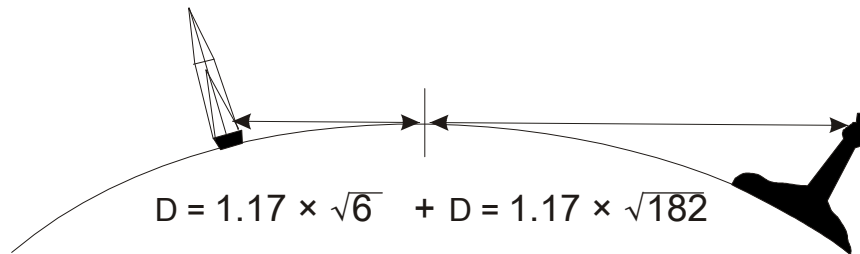
So the first use of this equation is in determining if you are far enough offshore to practice your sextant work exactly as if you were way offshore.

But there is another use for this equation. You are offshore at night, approaching the western entrance to the Strait of Juan de Fuca. You are on the lookout for the light at

Carmanah Point. Your chart tells you that the light is 182 feet above the high water mark.¹⁰



If you figure where the horizon is as far as the light is concerned, and figure where the horizon is as far as your eye is concerned, you can know at what distance the Carmanah Point light will peek over the horizon.



Work this out, and you can know that the light will just peek over the horizon when you are 18.65 nm offshore. And a distance plus a bearing will give you a fix.

Calculating this on the slide rule will be a little faster if you think of it as...

$$D = (\sqrt{6} + \sqrt{182}) \times 1.17$$

The chart notates the nominal range of the light, i.e. the distance at which it is visible, based on the brightness of the light. As long as the nominal range is greater than the geographical range you have just calculated, then you will see the light peeking above the horizon at that calculated distance.

¹⁰ This is the height of the light itself, not of the structure that houses the light. Also note, to be accurate, you must take the state of the tide into account to determine the height of the light above sea level at this moment.

In the case of the light at Carmanah Point, the nominal range is 19 nm...so you are fine to see it when you come up on it at 18.65 nm.

§37. *Dip*

The proper, accepted equation for calculating dip is:

$$\text{Dip} = 0.97 \times \sqrt{h}$$


However, many navigators simply use:

$$\text{Dip} = \sqrt{h}$$

If your eye is 8' above water level, the difference between the proper value in the first equation and the value from the second equation is less than 0.1' of arc...navigationally insignificant.

Calculate the dip, in minutes of arc, where the height of the eye is 8 feet.

$$\text{Dip} = \sqrt{8} = 2.8'$$



§38. *Distance by Vertical Angle of Object Beyond the Horizon*

The scenario this addresses is that you are sailing offshore, and at some point you can see the top of a hill/mountain poking above the horizon. The base of that hill/mountain is below the horizon from you...but you know how high it is by looking at your chart. By measuring the angle from the top of the object to the horizon, and introducing corrections for refraction and the curvature of the earth, you can come up with a distance from the object. Combine that distance with a bearing, and you have a fix.

This technique is similar to great circle routes/sight reduction, in that it requires a DR position to start with. The more accurate your DR position, the better results you will get from this method.

However, if you suspect you have an unreliable DR, you can run through these equations up to three or four times, each time using the fix from the previous iteration as your starting point.¹¹

As part of your pre-voyage planning, I recommend that you look at table 15 in Bowditch (2002)¹² to get a sense of when your landfall will become visible above the horizon. This will give you a context for establishing a good DR position.

Example, where a 1,000 foot hill is observed from 15.0 miles out, and Hs is 0° 37'. The navigator, however, establishes a DR that is 20 miles out. He uses this 20 nm number as the input for these equations.

- | | |
|------------------------------------|--|
| 1. Observe angular height of hill. | 0° 37.0' |
| 2. Correct for IE. | 2.3' on the arc |
| 3. Correct for dip. | $\text{Dip} = 0.97 \times \sqrt{h}$ <p>If height of eye = 6 feet, dip = 2.4'</p> <p>1,000 miles from the nearest land, I would use $\text{Dip} = \sqrt{h}$ to calculate dip. Closer to shore, I would seek as much accuracy as I could get, hence $\text{Dip} = 0.97 \times \sqrt{h}$.</p> |
| 4. Correct for refraction. | $\text{estimated distance to object} \times \frac{1}{12}$ <p>Where estimated D is (as always) in nm, and answer is in angular minutes.</p> <p>If D = 20 then correction = 1.7'</p> |

¹¹ In my own testing, it was seldom of any value to go beyond four iterations. By that time, you are getting a good fix, and are starting to circle about a central value.

¹² <http://tinyurl.com/cbp6h5d> (retrieved 05 March 2015).

So then...

$$\begin{array}{r}
0^\circ 37.0' \\
- 2.3' \\
- 2.4' \\
\hline
0^\circ 31.3' \\
- 1.7' \\
\hline
0^\circ 29.6'
\end{array}$$

Hs
IE
Dip
Apparent Altitude
Correction for refraction
Ho

6. Allow for the curvature of the earth.

$$1000 - (20^2 \times 0.9) = 640 \text{ feet}$$

Subtract from the height of the object, in feet, the square of the estimated distance in nm \times 0.9. That is:

$$h - (D^2 \times 0.9) = h$$

7. With these corrections in place, use the standard equation for distance off by vertical angle.¹³

$$D = \frac{H \times 0.565}{Ho}$$

Distance + bearing gives you a fix.

$$D = (640 \times 0.565) / 29.6$$

$$D = 12.2 \text{ nm}$$

Now, we know (from peeking at the GPS) that your actual distance from the crest of the hill was 15 miles instead of the 20 that you estimated. Your DR was out by 5 nm. This calculation was out by 3.8 nm. Not great, but closer than you were to begin with.

If you redo this calculation, using 12.2 nm as your estimated D, then you would get:

$$\begin{array}{r}
0^\circ 37.0' \\
- 2.3' \\
- 2.4' \\
\hline
0^\circ 31.3' \\
- 1.0' \\
\hline
0^\circ 30.3'
\end{array}$$

Hs
IE
Dip
Apparent Altitude
Correction for refraction
Ho

$$1000 - (12.2^2 \times 0.9) = 866 \text{ feet}$$

$$D = (866 \times 0.565) / 30.3$$

$$D = 16.1 \text{ nm}$$

After the 2nd iteration of your calculations, you are only 1.1 nm away from agreeing with your GPS.

¹³ This is the same equation, but with no correction for refraction or curvature of the earth, that you use when you are within just a few miles of shore, and can measure the angular height between the top of a lighthouse and the high-water mark.

If you redo this calculation a 3rd time, you would get:

0° 37.0'	Hs
- 2.3'	IE
- 2.4'	Dip
0° 31.3'	Apparent Altitude
- 1.3'	Correction for refraction
0° 30.0'	Ho

$$1000 - (16.1^2 \times 0.9) = 767 \text{ feet}$$

$$D = (767 \times 0.565) / 30.0$$

$$D = 14.4 \text{ nm}$$

So after the 3rd iteration, you are down to 0.6 nm away from your GPS. You could attempt a 4th iteration, but you have moved by this time, and it is probably time to get back on deck and maintain your situational awareness.

You have already worked dip with your slide rule, using a square root, in §37. The only new skill to acquire here is to do a square.

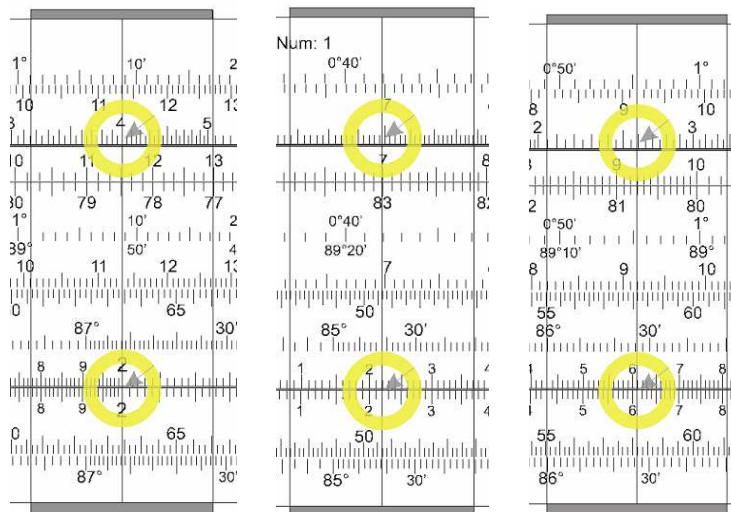
To calculate the squares that you needed for step 6, pick the number on the D scale, and read the square of that number on the A scale.

Illustrating the squaring of estimated D in each case below:

$$20.0^2 = 400$$

$$12.2^2 = 149$$

$$16.1^2 = 259$$



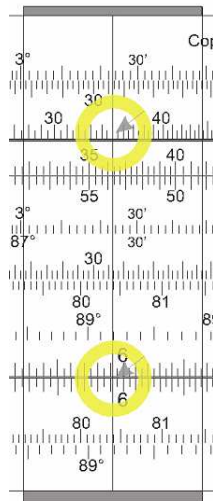
§39. *Maximum Hull Speed*

Another chance to practice your newfound skill in determining square roots will be to calculate the maximum hull speed of your vessel. This equation describes the approximate limit for hulls that are not planing. It is approximate, as there are differences based on hull shape...but there are some fundamental laws of physics that makes it more true than not.

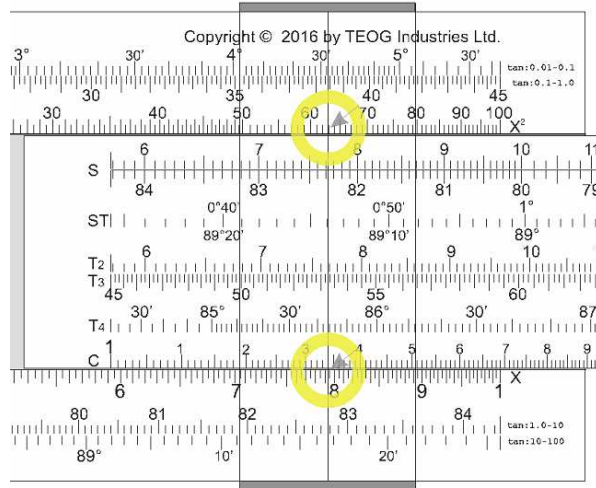
$$S = 1.34 \times \sqrt{LWL}$$

So if you have a vessel where the LWL (length at the water line) is 35 feet, you determine your hull speed as follows.

Position the cursor over 35 on the A scale. Read the square root on the D scale: 5.92.



Then move the left index on the slide under the cursor, then move the slide over to 1.34 on the C scale, and read the answer on the D scale = 7.93 knots. No matter how you trim your sails, or how hard you push your diesel, you are not really going to go any faster than this, unless you can get the hull up on a wave and plane.



As to why this equation works, it has to do with the physics of waves. <http://tinyurl.com/jxynsw6>¹⁴ is an interesting article with a good illustrative picture.

A powerful vessel can often tow a smaller vessel at above its hull speed. When this happens, the stern falls into the trough of the wave, the bow kicks up, and additional improvements in speed come only with a disproportionately larger increases in power for ever smaller increases in speed. <http://tinyurl.com/jdmxy7f> is a picture of a dinghy being towed at above hull speed.

Most cruising sailboats lack the power to go beyond hull speed, unless they are planing/surfing, or have exceptionally narrow-but-long hulls, such as some catamarans have.

Do note that LWL can vary as you are heeled over. So applying this equation may not be entirely straightforward. But LWL will never exceed LOA (length over all), nor matter how far the vessel is heeled.

Trigonometry

§40. *Distance Off by Two Bearings and the Run Between*

When reading navigational manuals, you will discover that there are a variety of “easy” rules to remember if you want the distance to an object by two bearings plus distance run:

- Four point fix
- Double the angle on the bow
- 7/10 rule
- 7/8 rule¹⁵

¹⁴ Retrieved 11 March 2016.

If you have a slide rule, however, then there is one quick and easy strategy that will work with ANY pair of bearings plus the run between.

Here is the basic scenario, where you are cruising toward a light or other navigational aid:

1. Note the log reading on your knotmeter at the moment you take the first bearing on the light.
2. Carefully maintain your course. (Speed can vary since you are using your electronic knotmeter's log. If you don't have such an instrument, then maintain a constant speed and calculate distance run as outlined in §26.)
3. After some time has passed, take another bearing on the object, and note the distance run from your log.
4. Subtract the smaller bearing from the larger, to get the difference.

You will be using this relationship, which looks scarier than it is:

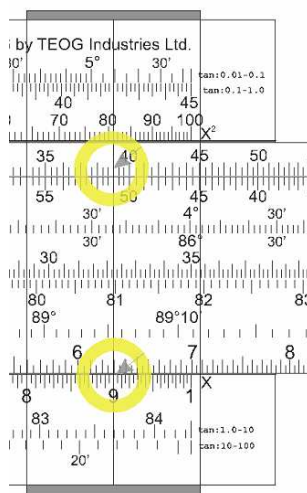
$$\frac{\text{distance run}}{\sin(\text{difference between bearing 1 and bearing 2})} = \frac{\text{distance from object when bearing 1 was taken}}{\sin(\text{bearing 1})} = \frac{\text{distance from object when bearing 2 was taken}}{\sin(\text{bearing 2})}$$

Example:

Your vessel observes a light bearing 25°, and after running 9 miles, it bears 64°.

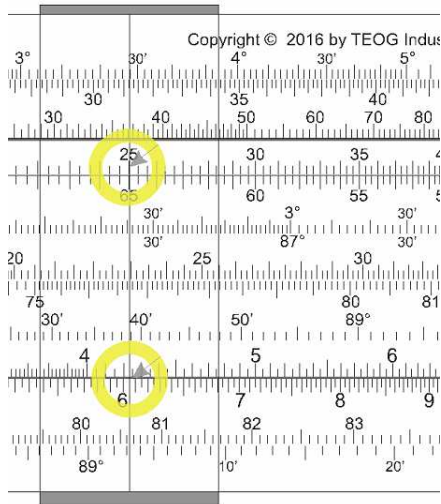
The difference between bearings is 64° - 25° = 39°

Position your cursor over 9 on the D scale. Move the slide until 39° on the S scale lies under the cursor.

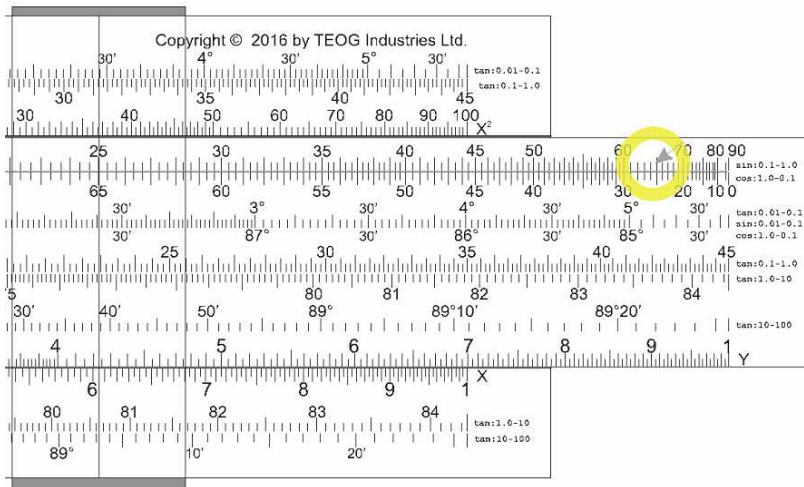


Now, slide the cursor over to the sine of the first bearing that you took: 25. Read off the D scale that when you took your first bearing, you were 6.05 nm from the light.

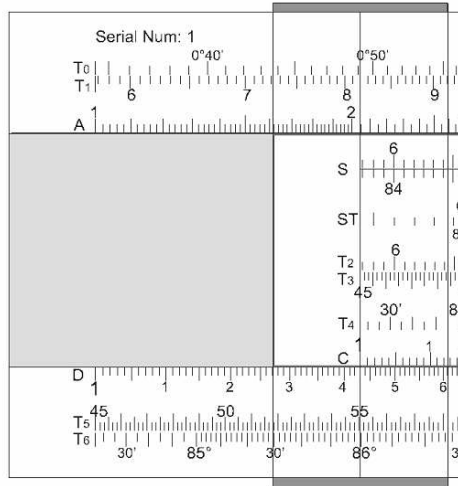
¹⁵ Cf. Husick, Charles B., *Chapman Piloting & Seamanship* (New York: Hearst Books), 2009. Chapter 18.



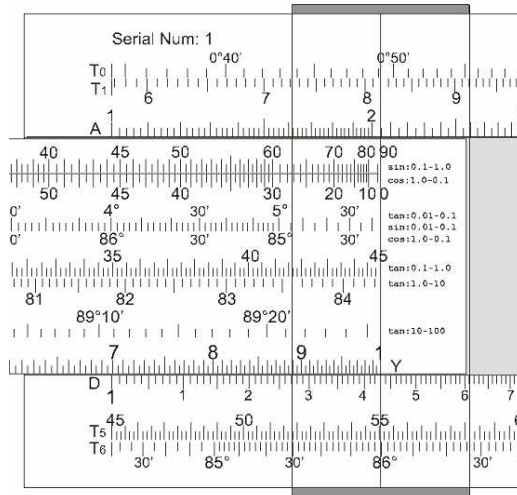
You cannot simply slide the cursor over the sine of 64° , the second bearing you took, as $\sin(64^\circ)$ extends out beyond the right index on the D scale.



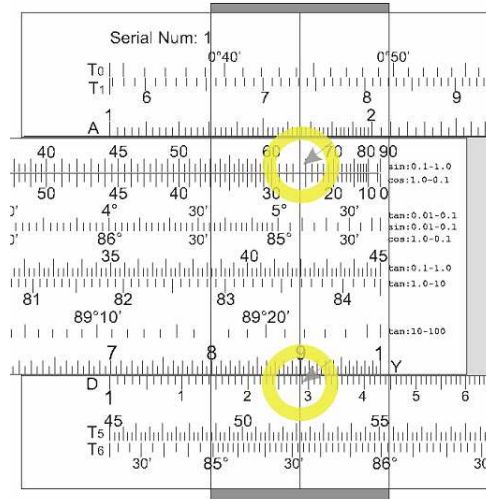
So slide the cursor over the left index on the slide.



Now move the right index of the slide until it is beneath the cursor.



Now, move the cursor until it is over 64°, the second bearing you took, and read the distance off at that point from the D scale: 12.85 nm.



With this data in hand, bearings and distances, you are ready to head down to the navigation station and plot your fixes and the course line you have been following¹⁶. You can observe in a heartbeat whether your current course will leave at a safe distance when the light is abeam¹⁷, or if a course change is called for.¹⁸

§41. Scope of a Given Universal Plotting Sheet

While not quite true, technically, when you configure a VP-OS plotting sheet, you are essentially making Mercator chart for a small area. It is accurate for a particular range of longitude. But if you move outside that range, then you need to create a new sheet and re-establish the width of a degree of longitude.

If you want your plotting sheet to be accurate to within 1%,¹⁹ then:

Usable latitude range in minutes = $34 \div \sin(\text{Latitude})$

Imagine you are sailing at 12° latitude.

Step 1: Position the cursor over 34 on the D scale.

Step 2: Move the slide until 12° from the top half of the S scale is underneath the cursor.

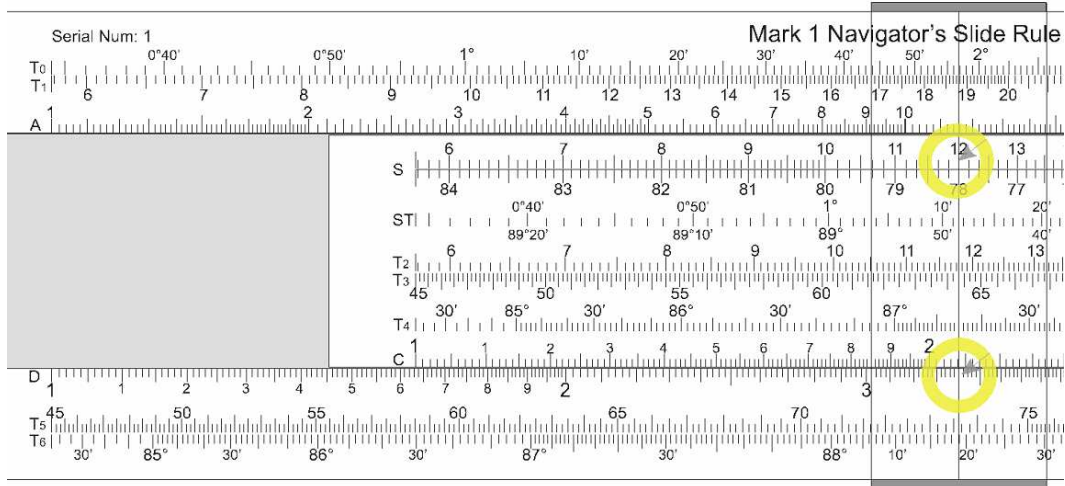
¹⁶ This is one of the calculations you can make with a slide rule, with almost no practice at all, more quickly than you can with an electronic calculator. The technique is so easy and fast, it may well become a favorite in your navigational toolbox.

¹⁷ It is often the case that lights are on points of land that have a region of shoals extending some distance offshore from that point.

¹⁸ While the quickest method to solve this problem is with your pencil and straightedge, if you are utterly addicted to navigational math, you can calculate your distance off – if you continue your current course – with this equation:

Distance-off-when-abeam = Distance-off-at-Bearing-Point-2 × cos(90° minus bearing-off-the-bow-at-point-2)

¹⁹ <http://tinyurl.com/hd6t7zi> (retrieved 04 March 2016).



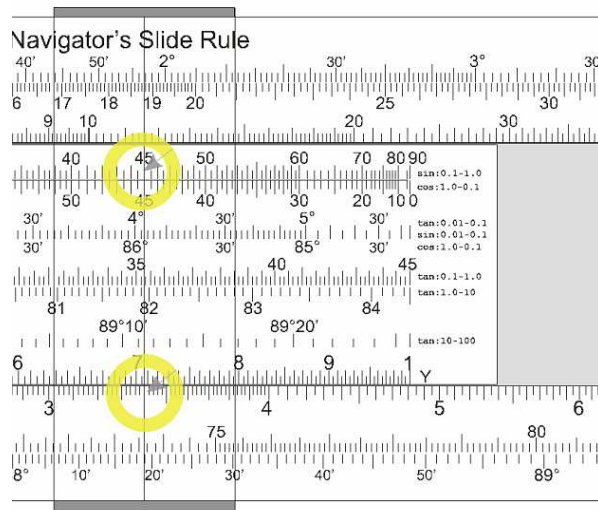
Step 3: Read the answer on the D scale, immediately under the left index of the C scale, i.e. 163'.

So a plotting sheet constructed for 12° latitude will have acceptable accuracy for positions ± 163' of latitude from 12°, or ± 2° 43', or within a latitude range from 9° 17' to 14° 43'.

If you are sailing at 45° of latitude, then:

Step 1: Position the cursor over 34 on the D scale.

Step 2: Move the slide until 45° from the top half of the S scale is underneath the cursor.



Step 3: Read the answer on the D scale, immediately under the left index of the C scale, i.e. 44'.

So a plotting sheet constructed with a central latitude of 45° will have acceptable accuracy for positions ± 48' of that latitude, or within a latitude range from 45° 48' to 44° 12'. Hence, you will want to construct a new plotting sheet for central latitudes of 44° or 46°.

§42. *Sight Reduction/Great Circle Route Calculations*

The basic method for solving a spherical triangle was worked out in ancient Greece. Different variations of this solution have been formulated to try and optimize for different tools and scenarios.

The solution that gives the best results when doing calculations with a slide rule was developed in 1920 by Captain L.G. Bygrave²⁰ of the Royal Air Force. Plotting a great circle route is precisely the same calculation as you would use for sight reduction of a celestial sight.

On balance, the Bygrave equations will yield more accurate results when calculated on a slide rule than the more usual sine/cosine equations.

Given that this is a 10" rule, the full range of sine values = scale ST + scale S = 20 inches. The full range of tangent values = scale ST + scale T₂ + scale T₃ + scale T₄ = 40 inches.

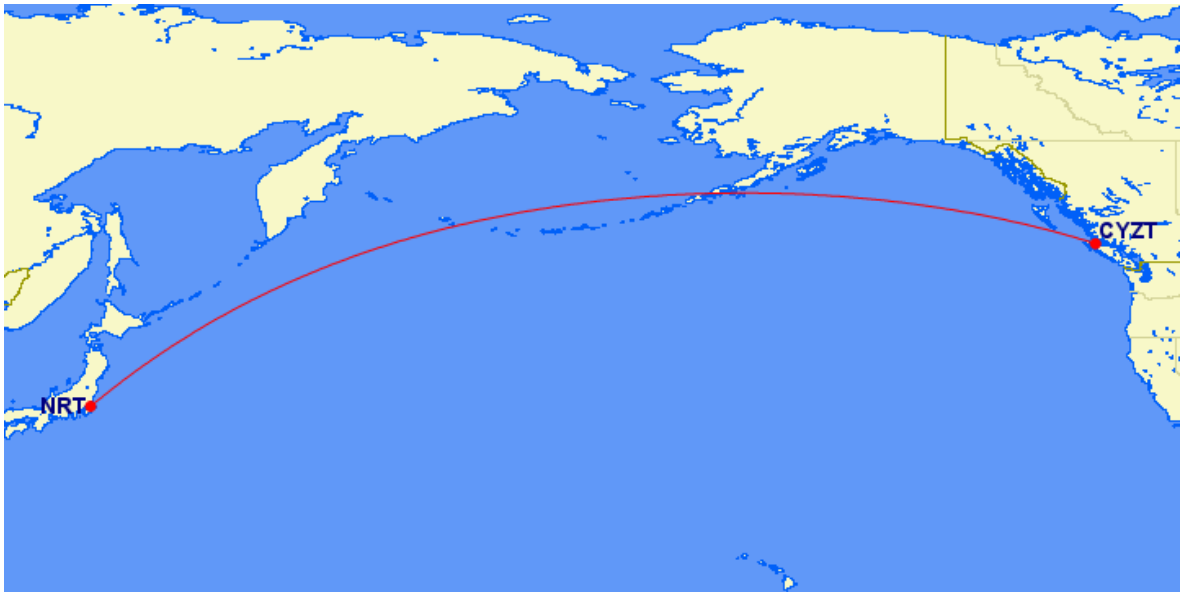
The Bygrave equations still use cosine values, and like sines, all the solutions need to fit into 20" of rule length. But a person can dial in his tangent values more precisely, using all 40" of rule length. So at least *some* of the values you use will be more precisely set than if you are using sine/cosines only.

If you wish to sail from Port Hardy, on the northern tip of Vancouver Island, to Tokyo, your "straight line" course is called a great circle route.

²⁰ Captain Bygrave's original slide rule was actually cylindrical rather than straight. The advantage of this design was that the scales, if unwound, would be many feet long. It gave much better accuracy than a 10" straight slide rule. You can see a picture of one at https://en.wikipedia.org/wiki/Bygrave_slide_rule.

Gary LaPook has done extensive research and writing about the Bygrave, and the worksheet in this section for solving the navigational triangle, is entirely derived from Gary's website at <http://tinyurl.com/BygraveSlideRule>.

I am deeply indebted to Gary for coaching me on how to do great circles/sight reduction with the Bygrave equations.

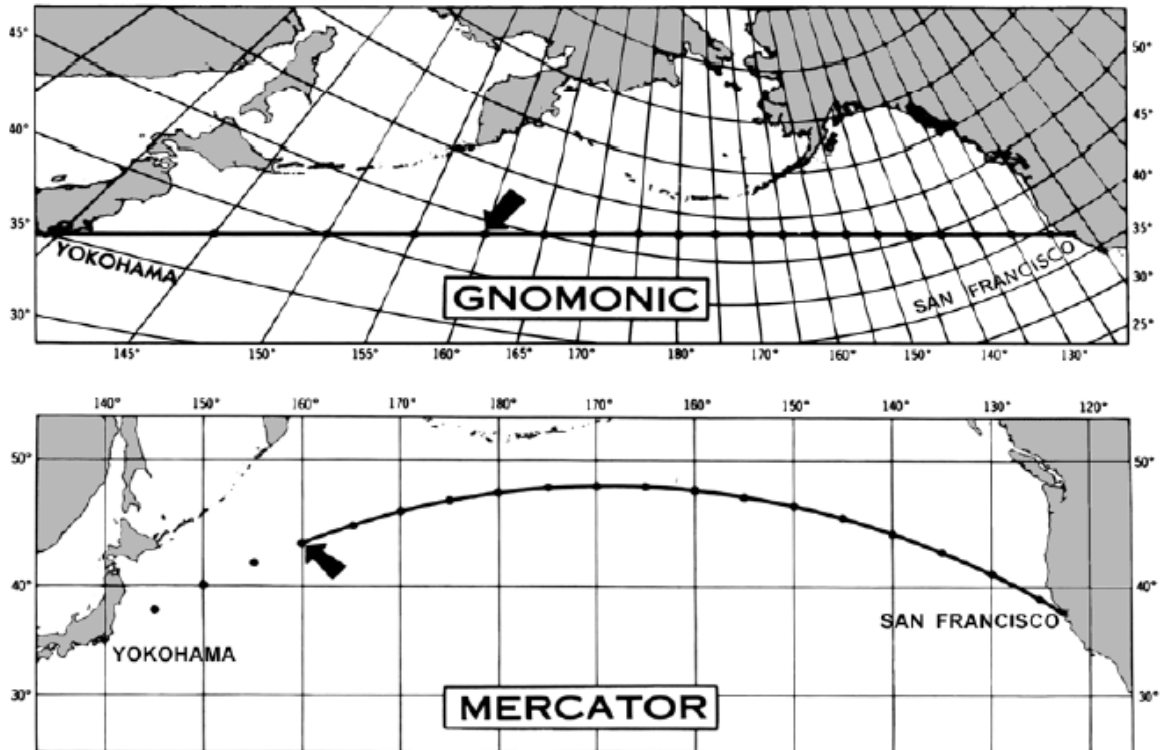


Such a course looks like a curve on a Mercator chart, as above. But if you get a globe and tape a piece of dental floss from your starting port to your destination, you can visualize that the shortest distance from Port Hardy to Tokyo will indeed take you through the Bearing Sea.



Figuring out what course to steer to be most efficient can be a bit of a challenge, insofar as the compass course is slowly but continuously changing.

You can purchase a gnomonic chart, of course.



But frankly, I have never much cared for gnomonic charts. They are a cool idea, but costly, and big enough to be awkward to use in a 45 foot yacht. Further, depending on your cruise plan, you may need several of them. Big container ships can pick a course and stick with it across an ocean, but cruising sailors tend to be always working compromises between wind/weather/shortest-course. Depending on the location of the North Pacific High, a sailing yacht on its way from Hawaii to Vancouver may go almost as far north as the Aleutian Islands before picking up the westerly breezes that let it head for home. This can lead to an untidy gnomonic chart as you keep replotting great circle courses from locations you never expected to be at.

On the other hand, I can do a great circle calculation in 4 minutes on a slide rule,²¹ once a day, and recalculate an almost²² perfect great circle route, from anywhere to anywhere.

Besides, as will be seen below, once you figure out how to calculate a great circle route, you will automatically be able to do sight reduction of any star you wish without having to pack all six volumes (at 12.6 pounds!) of Pub. 229 along.²³

²¹ I can also do it with an electronic calculator, of course. But there is no time savings for me. It takes 4 minutes to work out on a calculator, and 4 minutes to work out with a slide rule. It is more *fun* to use the slide rule.

²² The earth is big enough that a rhumb line course is virtually identical to a great circle course for distances less than 200 nm. So a once-a-day recalculation of the course to sail will work out just fine. Frankly, those who use gnomonic charts often only calculate their course changes for once every 5° of longitude. The man with a slide rule in his hand will steer smaller.

Now, as I am planning my trip from Port Hardy to Tokyo, I discover that Dutch Harbor is almost directly on the great circle route I want to follow, so I decide that I will lay over there for a day or two to warm up, wash some clothes, then get a hamburger and fries after weeks of boat food.



Port of Departure: Port Hardy, N 50° 43.3', W 127° 29.6'
 Destination: Dutch Harbor, N 53° 53.4', W 166° 32.5'

Inputs for calculation: the latitudes of both ports, plus the difference between the longitudes.

	166° 32.5'	
	-127° 29.6'	
Difference	39° 02.9'	West (i.e. from Departure to Dest is west)

This difference is known as the “meridian angle” and is abbreviated as “H”.

Before going further, it would be good to review how to convert azimuth angles (Az) into azimuths (Zn).²⁴

²³ <https://www.starpath.com/catalog/books/1898.htm>

Because of the ease of use, even a slide rule lover like me will still want to keep at least volumes 2 and 3 of Pub. 249 aboard to use with sun/planets plus a number of the bright stars in the sky.

But for those occasional sights of stars that lie outside the range of declinations that Pub. 249 covers, your Mark 2 Navigator’s Slide Rule will serve just fine.

²⁴ William Bligh was a failure as a leader of men, but a superb navigator. You can read his fascinating account of the 3,600 nm voyage in an open boat that he undertook, with a handful of men, after being set adrift by the mutineers of the *Bounty*, available at <http://tinyurl.com/AzimuthAngles>.

One of the interesting things to note is that he never uses azimuths to describe his course. Rather, he will talk in terms of sailing “a N 72° W course” (i.e. 288°) or “course S 88° W” (i.e. 268°).

Azimuth Angle (Az)	Azimuth (Zn)
N 10° E	10°
S 10° E	170°
S 10° W	190°
N 10° W	350°

When doing spherical trigonometry, results for the course to steer are in azimuth angles. One must convert these angles into azimuths in order to get a compass course to steer.

In writing down values, write down values to the nearest minute. Ignore the tenths of a minute. There is no way a slide rule can resolve a number down to the nearest tenth of a minute.

Finally, when subtracting a value of, for example, 23° 58' from 90°, it is easier if you first convert that 90° 00' to 89° 60'...an equivalent value, but easier to work with.

$$\begin{array}{r} 90^{\circ} 00' \\ -23^{\circ} 58' \\ \hline \end{array}$$

Hard to do

$$\begin{array}{r} 89^{\circ} 60' \\ -23^{\circ} 58' \\ \hline 66^{\circ} 02' \end{array}$$

Port Hardy (N 50° 43.3', W 127° 29.6') to Dutch Harbor (N 53° 53.4', W 166° 32.5')

Great Circle Calculations/Sight Reduction

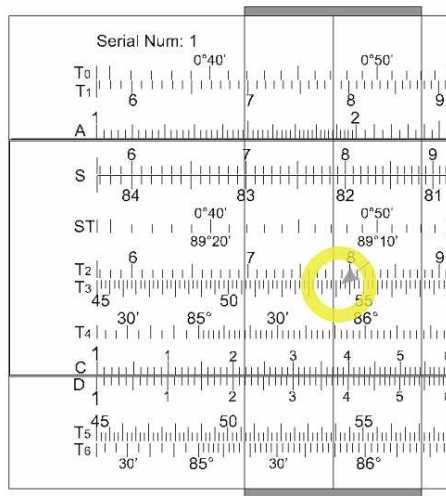
DATA INPUTS: Meridian Angle < 90°	Differences Where Meridian Angle > 90°
Meridian Angle (H) = 39° 03' W E/W	180°-Meridian Angle = (H) = ° ' E/W
My Latitude (L) = 50° 43' N N/S	
Latitude Dest. (d) = 53° 53' N N/S	
1. $\tan(d) \div \cos(H) = \tan(W)$ $W = \mathbf{60^\circ 30'}$	
2. Use [+ W] if d has the same name as L. Use [- W] if d has opposite name as L. $(90^\circ - L) \pm W = X$ $X = \mathbf{99^\circ 47'}$	2. $\begin{array}{r} 89^\circ 60' \\ -50^\circ 43' \\ \hline +60^\circ 30' \\ \hline 99^\circ 47' \end{array} = X$ $= \mathbf{\quad^\circ \quad'}$
3. Ignore the sign of X (i.e. -60 = 60) If X < 90°, then X = Y If X > 90°, then 180 - X = Y $Y = \mathbf{80^\circ 13'}$	
4. $[\cos(W) \div \cos(Y)] * \tan(H) = \tan(Az)$ $Az = \mathbf{N 66^\circ 53' W}$ N/S E/W Use N if Dest. is N of Your DR Use E if Dest. is E of Your DR	
5. $\cos(Az) * \tan(Y) = \tan(Hc)$ $Hc = \mathbf{66^\circ 17'}$ $Zn = \mathbf{293^\circ 07'}$	
6. $(90^\circ - Hc) * 60 = \text{Distance}$ $\begin{array}{r} 89^\circ 60.0' \\ - \mathbf{66^\circ 17'} \\ \hline \mathbf{23^\circ 43'} \end{array}$ Convert to decimal degrees. $\begin{array}{r} \mathbf{23.7^\circ} \\ \times \quad 60 \\ \hline \end{array}$ $D = \mathbf{1,422} \text{ nm}$	6. Distance = $(90^\circ + Hc) * 60$ $\begin{array}{r} 89^\circ 60.0' \\ + \mathbf{\quad^\circ \quad'} \\ \hline \mathbf{\quad^\circ \quad'} \end{array}$

Write down the data inputs: meridian angle,²⁵ your latitude, and the latitude of your destination. You will use the left hand side of the form exclusively, since your meridian angle is less than 90°.

Step 1: $\tan(53^\circ 53') \div \cos(39^\circ 03') = \tan(W)$

Center the slide in the body, and position the cursor over 52° 53' on the T₃ scale.

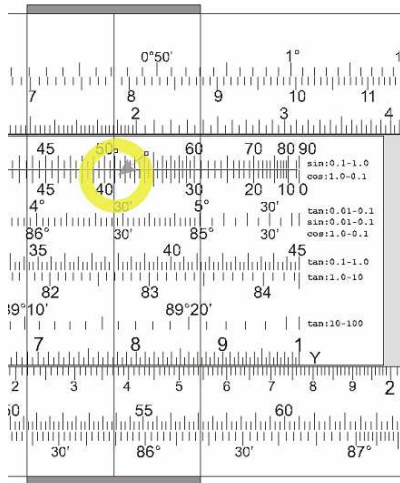
There is no way, with slide rule accuracy, you can do anything about that final "point four" minutes. Just come as close as you can.



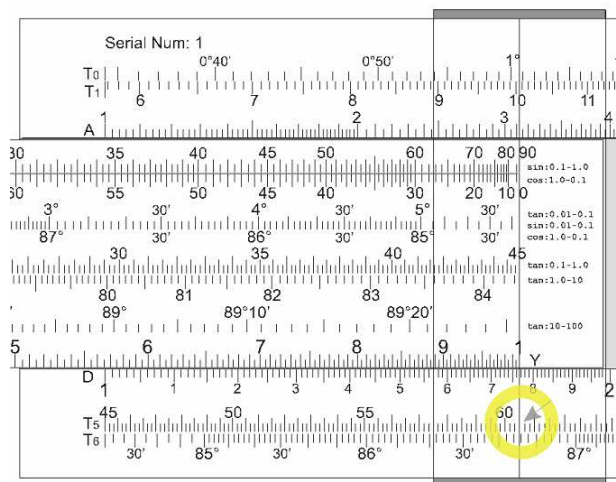
²⁵ If you are fuzzy on "meridian angle", it is the difference between your longitude and that of your destination, expressed as a value from 0° to 180°, going either east or west. Your location, your destination, and the north pole are the three points of the navigational triangle you are trying to solve.

If your entire training in celestial navigation involved the LHA from 0° to 360°, measured westward, then you have to reorganize your thinking a bit to use either a slide rule or a calculator to solve the triangle.

Position $\cos(39^\circ 03')$ from the S scale underneath the cursor, in order to divide.



Move the cursor to the right index, and read $60^\circ 30'$ on the T_5 scale.

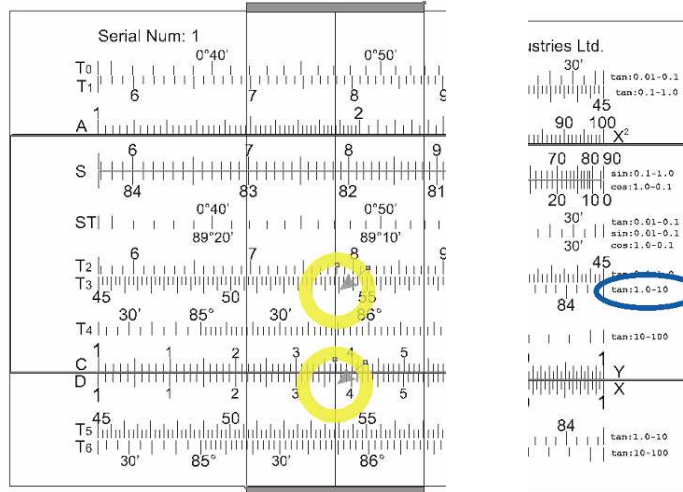


Which of the T-scales should I use to read my answer?

First, if you are doing these calculations once a day while sailing, the values will be in the same general range from one day to the next. Having calculated a great circle route on one day, you already know roughly what to expect when you recalculate the next day.

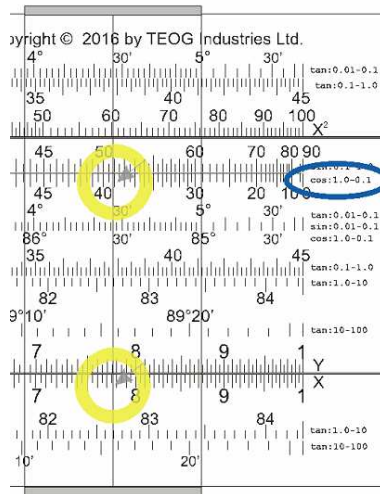
If you are starting this particular problem cold, however, you can get a sense of the range of your final answer by observing the numeric values of $\tan(53^\circ 53')$ and $\cos(39^\circ 03')$.

Note the value of $\tan(53^\circ 53')$, and also look at the right end of the T_3 scale.



You see that scale T₃ deals in values of 1.0 to 10. So the tangent of this angle is 1.37.

Look at the value of $\cos(39^\circ 03')$, and observe the cosine values on the right edge of the scale. Scale S deals in cosine values of 1 to 0.1.



So the value of $\cos(39^\circ 03')$ is 0.776. This means that the equation of step 1 may be expressed as: $1.37 \div 0.776$. I can know at a glance that .776 is going to go into 1.37 something in the neighborhood of 2 times.

Since scale T₅ deals in values from 1 to 10, I know that my answer of 2-ish needs to be read on scale T₆.

Once you get a feel for the kinds of answers that are in-range, you can multiply and divide cosines and tangents without concern for the values on the C or D scales.

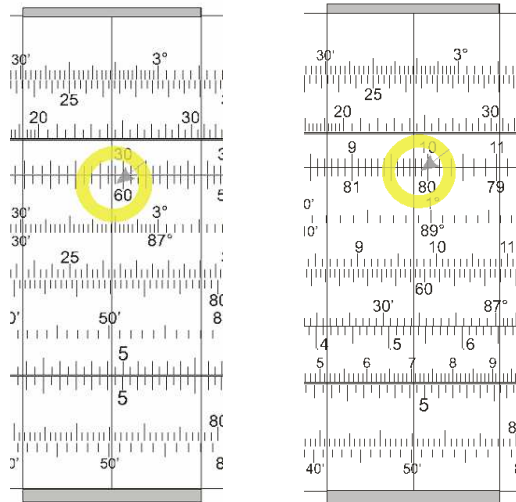
Section §46 reviews the technique for doing mental math with trig functions.

Step 2: $(89^\circ 60' - 50^\circ 43') + 60^\circ 30' = 99^\circ 47'$

Step 3: $179^\circ 60' - 99^\circ 47' = 80^\circ 13'$

Step 4: $[\cos(60^\circ 30') \div \cos(80^\circ 13')] * \tan(39^\circ 03') = \tan(Az)$

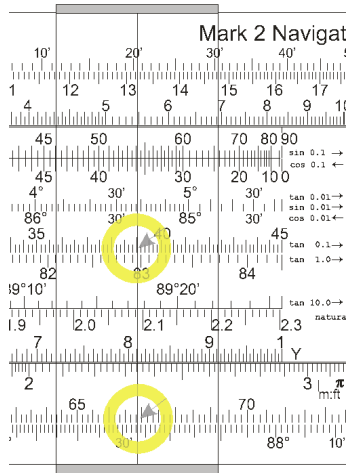
Center the slide, then position the cursor over $\cos(60^\circ 30')$ on the S scale. Move $\cos(80^\circ 13')$ on the S scale beneath the cursor. This performs your division.



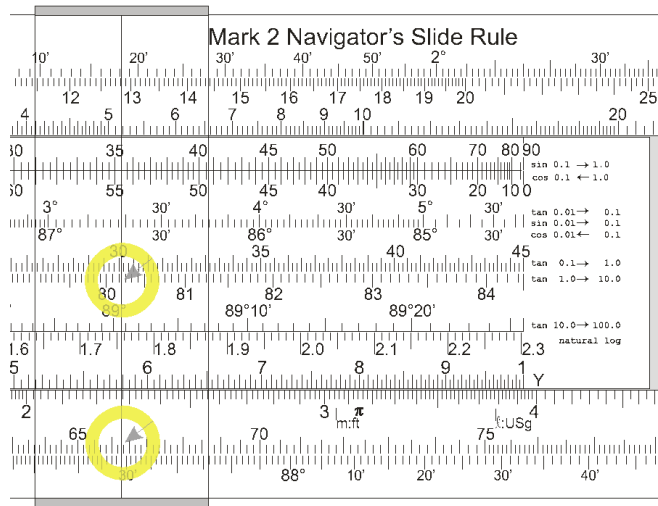
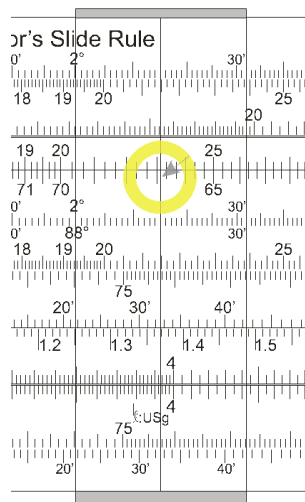
You are ready to go straight to multiplying now, so move the cursor over the top of $\tan(39^\circ 03')$ on the T_2 scale...except you can't quite do that now. $\tan(39)$ extends out too far to the right. So move the cursor to the left index, then move the right index on the slide to the cursor, and THEN multiply by $\tan(39^\circ 03')$ from the T_3 scale, and read your answer on the T_5 scale:

$$Az = 66^\circ 53'.^{26}$$

²⁶ If you are following along with your electronic calculator, you are saying, "That's not quite right." Correct! This is what is called "slide rule accuracy." But for a calculation method that involves no batteries, this is not bad.



Step 5: Center your slide, and position the cursor over $\cos(66^\circ 53')$ on the S scale. Then move the right index on the slide under the cursor, and multiply by moving your cursor over $\tan(80^\circ 13')$




$$H_c = 66^\circ 17'$$

$$Z_n = 292^\circ 42'$$

Step 6: $89^\circ 60' - 66^\circ 17' = 23^\circ 43'$. Convert this to decimal degrees = 23.7°

Multiply by 60, and get 1,422 nm.



How accurate are these results? Are the differences navigationally significant?

A good way to quickly compare your slide rule results with true values is from <http://www.bobgoethe.com/ResultChecker.htm>.

When doing a great circle calculation, enter your destination as though it were the GP of a celestial body, converting its longitude into GHA and equating its latitude with declination.

Bob Goethe's Slide Rule Result Checker
Based on Henning Umland's "Sight Reduction Calculator V1.51"

Geographic position of body:
Greenwich hour angle: 166° 32.5'
Declination: 53° 53.4' N S

My position:
Longitude: 127° 29.6' E W
Latitude: 50° 43.3' N S

Slide Rule Generated Hc: 66° 17' Sea horizon Center

Altitude correction parameters:
Index error*:
Height of eye: m ft
Air temperature: C F
Atm. pressure: mbar

Results:
Slide Rule Hc: 66° 17'
Computer Generated Hc: 66° 13.4'
Computer Generated Azimuth: 292° 56.7'
Intercept: 3.6 nm

If you hunt around on the web, you can find Henning's original web page. However, he includes a correction for refraction – useful enough if you have a sextant in your hand, but merely throws your numbers off if you are trying to check your slide-rule work. The version of this page at www.BobGoethe.com/ResultChecker.htm has been tweaked/optimized for slide rule result checking.

Zn, azimuth, the course to steer your boat, differs by $0^{\circ} 3.6'$ between slide rule and computer calculation for this particular problem. Given that small boats have a tough time steering any smaller than $\pm 5^{\circ}$, obsessing over azimuth accuracy of $3.6'$ is taking months off your life for no gain at all.

So no, the azimuth difference is not navigationally significant in this specific solution.

Hc differs by 3.6 nm between slide rule and computer calculation (this is the "Intercept"). This is not a very large error when the total distance is 1,422 nm.

So the distance difference is also not navigationally significant in this specific solution.

Special Rules

The accuracy of this method breaks down if the scenario you are solving for involves any cosines or tangents greater than 89° , tangents of angles less than 1° , or cosines of angles less than 10° .

There are special rules you can follow to cope with these limitations.²⁷ But in these cases, I think it is time to fire up the GPS app on your Android Phone, love of traditional navigation notwithstanding.

One more example will give you a chance to practice a bit more with your slide rule, as well as to illustrate the sight reduction of a star that has a meridian angle of more than 90° .

Schedar is a star in the circumpolar constellation Cassiopeia, and so is visible from mid-north latitudes all night. When you are looking south, no celestial object has a meridian angle of more than 90° . That is where your horizon is. But in looking at circumpolar stars, you can see a group of stars that clusters about the north pole through a full 360° . So then, the meridian angle of circumpolar stars could be anything up to east or west 180° .

This star has a declination (which you will use as input value "d" in the work form) of $N 56^{\circ} 37.0'$. The sidereal hour angle ("SHA" – equivalent to the longitude of a destination when doing a great circle course calculation) could be anything, depending on the time and date when you sight it.

For purposes of this example, we will assume that your vessel is still at Port Hardy, and that the SHA is such that the meridian angle from your location is 120° east.

²⁷ Look at the link to the Bygrave instructional form at Gary LaPook's website at <http://tinyurl.com/BygraveInstructions> for "Special Instructions".

Sight of the star Schedar from Port Hardy

Great Circle Calculations/Sight Reduction

DATA INPUTS: Meridian Angle < 90°	DATA INPUTS: Meridian Angle > 90°
Meridian Angle (H) = <u> </u> ° <u> </u> ' <u> </u> E/W	180° - Meridian Angle = (H) = <u>60° 00'</u> <u>E</u> E/W
My Latitude (L) = <u>50° 43'</u> <u>N</u> N/S	
Latitude Dest. (d) = <u>56° 37'</u> <u>N</u> N/S	

1. $\tan(d) \div \cos(H) = \tan(W)$	
W = <u>71° 46'</u>	
2. Ignore the sign of X (i.e. -) Use [+ W] if d has the same Use [- W] if d has opposite	2. Ignore the sign of x (i.e. -60 = 60)
$(90^\circ - L) \pm W = X$	$(90^\circ - L) - W = X$
X = <u> </u> ° <u> </u> '	X = <u>-32° 29'</u>
3. If X < 90°, then X = Y If X > 90°, then 180 - X = Y	
Y = <u>32° 29'</u>	
4. $[\cos(W) \div \cos(Y)] * \tan(H) = \tan(Az)$	
Az = <u>N 32° 43'</u> <u>E</u> N/S E/W	
Use N if Dest. is N of Your DR Use E if Dest. is E of Your DR	
5. $\cos(Az) * \tan(Y) = \tan(Hc)$	
Hc = <u>28° 09'</u>	
Zn = <u>32° 43'</u>	
6. $(90^\circ - Hc) * 60 = \text{Distance}$	6. $(90^\circ + Hc) * 60 = \text{Distance}$
<u> </u> ° <u> </u> '	<u> </u> ° <u> </u> '
<u> </u> ° <u> </u> '	<u> </u> ° <u> </u> '
<u> </u> ° <u> </u> '	<u> </u> ° <u> </u> '
Convert to decimal degrees.	
<u> </u> ° <u> </u> '	
x <u> </u> 60	
D = <u> </u> nm	

180° 00'
- 120° 00'
60° 00'

50° 43'
+ 71° 46'
122° 29'
- 90° 00'
32° 29'

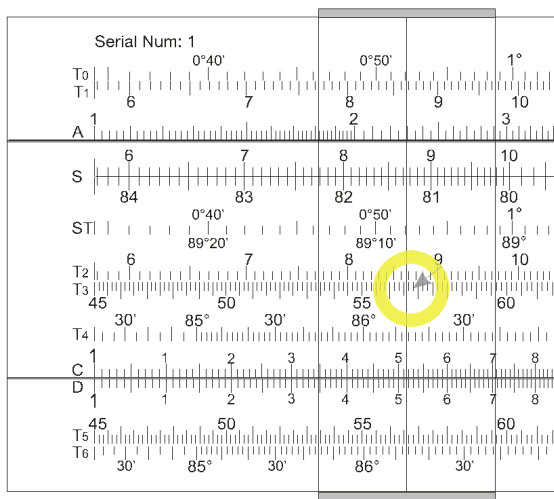


Since you are dealing with a meridian angle greater than 90°, you will use the substitutions from the right side of the form.

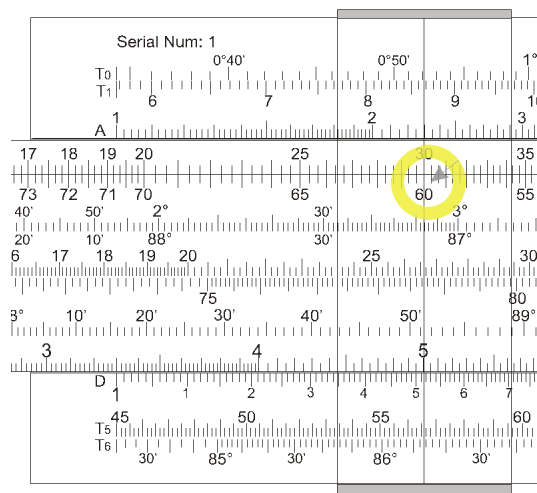
With a meridian angle of 120° E, H becomes 60° E.

Step 1: $\tan(56^\circ 37') \div \cos(60^\circ) = \tan(W)$

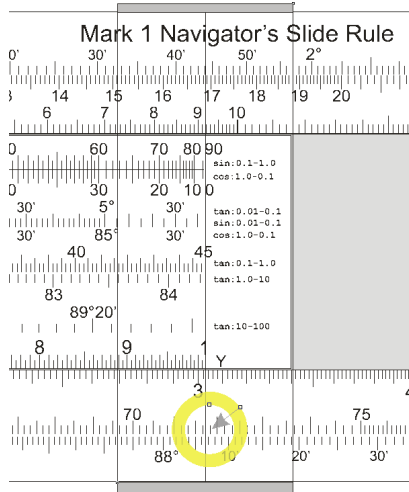
Center the slide. Position the cursor over $\tan(56^\circ 37')$ on the T₃ scale.



Position $\cos(60^\circ)$ on the S scale directly beneath the cursor.



Move the cursor over the right index. Read the answer off the T₅ scale.



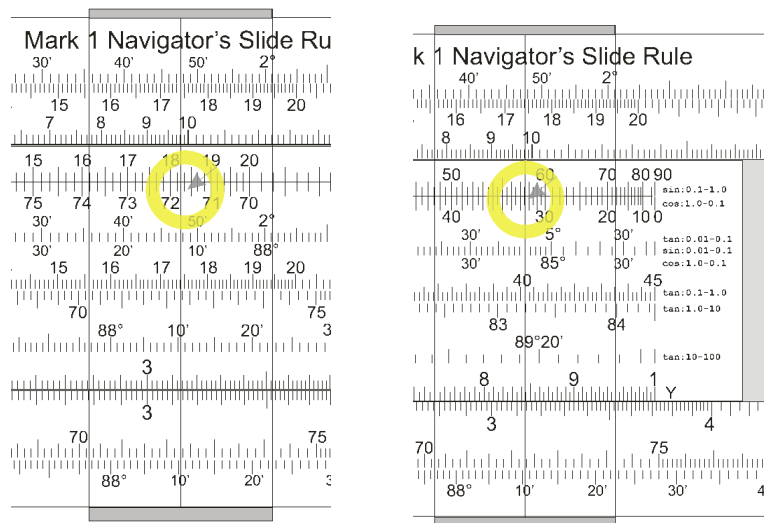
Step 2: Since you have been dealing in a meridian angle greater than 90°, complete step 2 from the right hand column. I find that doing minus minus values is a bit confusing.

What I did was to add L and W together = 122° 29', and then subtract 90° 00' from that. This is particularly suitable in that I am to ignore the sign of "X" in step 3.

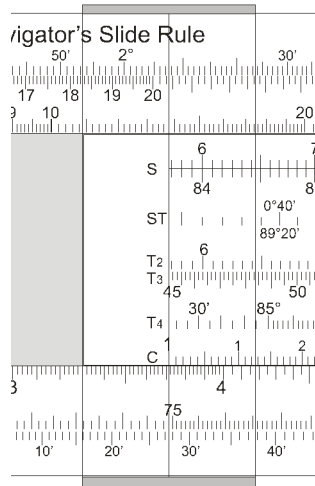
Step 3 is simple. Just enter 32° 29'.

Step 4: $[\cos(71^\circ 46') \div \cos(32^\circ 29')] * \tan(60^\circ 00') = \tan(Az)$

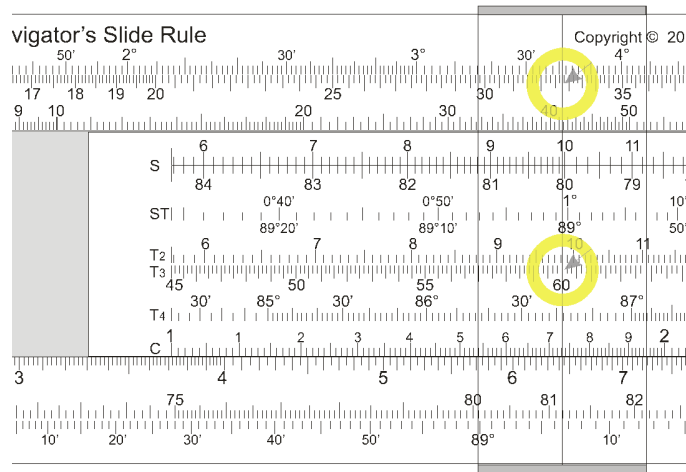
Position your cursor over $\cos(71^\circ 46')$ on the bottom half of the S scale, then move the slide until $\cos(32^\circ 29')$ on the S scale is beneath the cursor. This will set up the division portion of step 4.



You cannot simply slide the cursor until it is over $\tan(60^\circ)$. You must first move the slide until the left index is under the cursor.

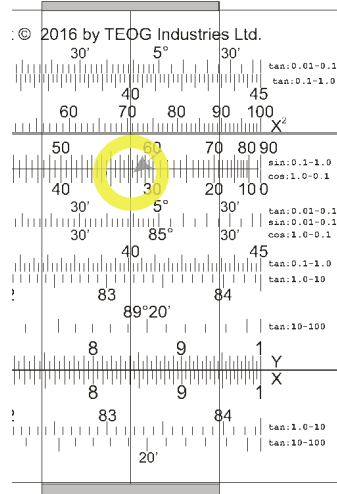


Now slide the cursor over the top of $\tan(60^\circ)$ on the T_3 scale. Read the answer of $32^\circ 43'$ on the T_5 scale.

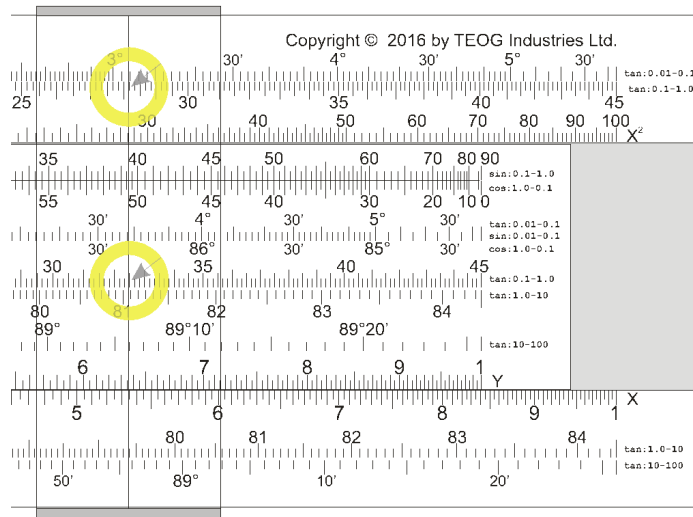


Step 5: $\cos(32^\circ 43') * \tan(32^\circ 29') = \tan(Hc)$

Center the slide. Move the cursor over the top of $\cos(32^\circ 43')$ on the S scale.



Move the right index under the cursor. Move the cursor until it is over $\tan(32^\circ 29')$ on the T_2 scale. Read the answer of $28^\circ 09'$ off the T_1 scale.



How accurate are these results? Are the differences navigationally significant?

Sight Reduction Calculator V1.51 – Copyright © 1998-2016 Henning Umland (with tweaks by Bob Goethe in 2016).

To use as a result checker for the Mark 1 Navigator's Slide Rule, leave all of the fields for "Altitude correction parameters" blank. Leave "Sea Horizon" and "Center" as they are.

Fill in the fields for the "GP" and "My Position", plus the "Slide Rule Generated Hc". Then click "Reduce sight".

Geographic position of body:
Greenwich hour angle ° ',
Declination ° ' N S

My position:
Longitude ° ' E W
Latitude ° ' N S

Slide Rule Generated Hc: ° ' Sea horizon Center

Altitude correction parameters:
 ' ' ' '
 m ft
 C F
 '

Results:
Slide Rule Hc ° '
Computer-Generated Hc ° '
Computer-Generated Azimuth ° '
Intercept nm

Whoa!! This is **too** good. According to this, the slide rule's intercept for this problem is only 1.6 nm from the computer-calculated value, and the azimuth agrees to the nearest minute. I have seldom seen a slide rule deliver results this accurate for complex, multi-step calculations.

What can we say about this?

- I was lucky when I worked out this sample problem.²⁸ I could easily have selected an answer that was different by 4 or 5 minutes just as a result of how I lined up the slide or cursor.
- This rather validates that I and my graphics software, together, were able to create correct trig scales for the Mark 2.²⁹
- A slide rule will give more accurate results on some problems than on others. There are certain ranges of values where a slide rule can hardly be used, while other ranges exist where it is inherently more accurate. This particular navigation problem appears to lie in a sweet spot for the 10" slide rule.³⁰

²⁸ I worked this sample problem fully out on the slide rule before going to Henning's web site to check my results. Frankly, I would have been happy just to be in the right *neighborhood* with my answer. Differences of 10 or 20 nm, when worked on a 10" slide rule, are much more typical.

²⁹ The graphics program I used to design the Mark 2, CorelDraw, will let you drive its output with Visual Basic code. I have used Corel Draw for years, and I have coded software for years. But this was the first time I attempted to wed those two things together.

³⁰ Now that I have tweaked Henning's web page so that it is easier to use in checking slide rule results, I can also establish default values for fields to make it easier to set up several similar problems in a row. I may do a series of problems to try and determine where the sweet spots lie. If

- I am lucky, to be sure, but damn, I'm also pretty good. I think it is time to leave off working on this user manual for now, go to the gym, pump some iron, and bask in the glow of a perfect azimuth value for the star Schedar.³¹
-

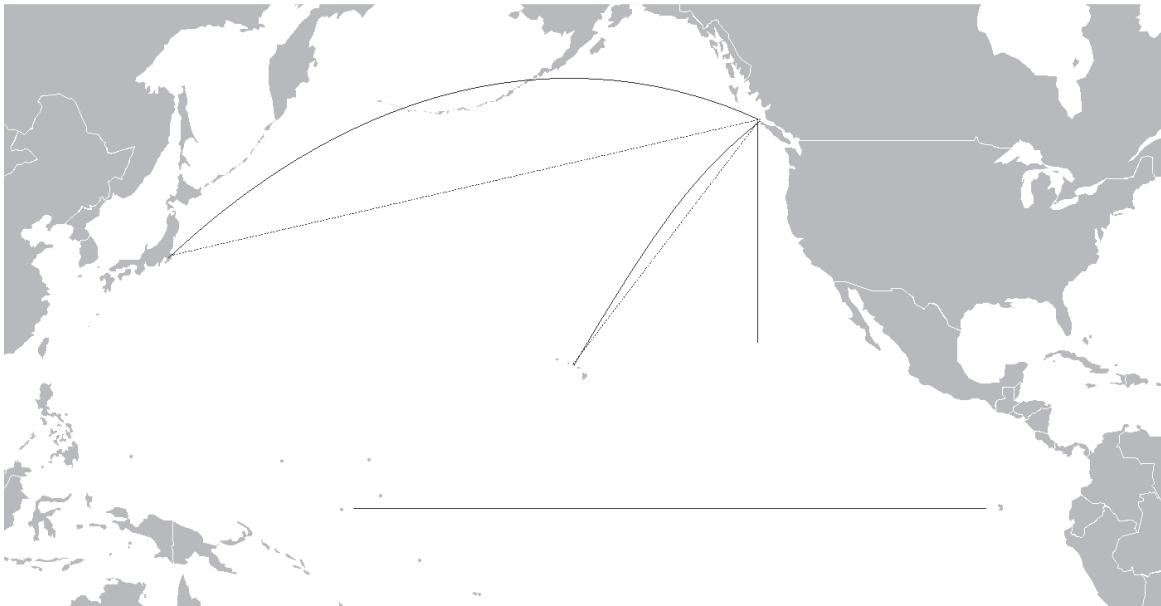
The two examples above illustrate:

- Northern-hemisphere-to-northern-hemisphere, meridian angle less than 90°
- Northern-hemisphere-to-northern-hemisphere, meridian angle greater than 90°.

These equations work without modification where you are looking at northern-to-southern-hemisphere, or southern-to-southern-hemisphere.

§43. Rhumb Line Route Calculation

When you are travelling N-S from anywhere, or E-W at the equator, a rhumb line course is precisely the same as a great circle route. Great circle routes become more efficient the further away you are from the equator, and the more you are travelling east-west rather than north-south. This graphic shows rhumb line courses as dashed lines and great circle routes as solid lines.



If you are travelling from Port Hardy, BC, to Hawaii, the difference between the rhumb line and great circle route is only 3 hours or so of sailing time. Not really worth the effort of recalculating your great circle heading on a day by day basis.

you have the ability to modify the JavaScript of a web page, you too can set up default values for yourself.

³¹ Getting a result this accurate has never happened to me before, and will never happen again. If I don't enjoy the moment now, I will have lost an opportunity.

But if you are seeking to sail non-stop from Port Hardy to Tokyo, the great circle route can shave several days off your trip compared to the rhumb line course.

So you know, intuitively, that some cruise plans will benefit from great circle planning, while others will not. Back up your intuitions with solid data by calculating a route first by great circle, then by rhumb line. This will help you determine which approach you want to use for a given cruise.

The example below deals in the same Port-Hardy-to-Dutch-Harbor problem as in the first great circle example above.

Port Hardy (N 50° 43.3', W 127° 29.6') to Dutch Harbor (N 53° 53.4', W 166° 32.5')

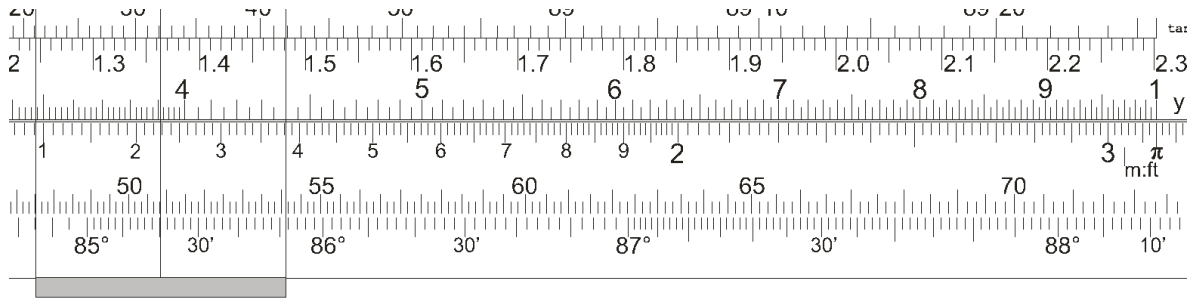
Rhumb Line Course Calculation

1	Destination latitude	53° 53.4' N	
2	Destination latitude in decimal degrees		53.9° N
3	My latitude	50° 43.3' W	
4	My latitude in decimal degrees		50.7° N
5	Difference between destination latitude and my latitude in decimal degrees (i.e. ΔL)		3.17°
6	Meridian angle between my longitude and destination longitude (i.e. H)	39° 02.9'	
7	Convert H into decimal degrees.		39.17°
8	$\pi * H$ in decimal degrees		122.9
9	(destination latitude in decimal degrees ÷ 2) + 45	71.92°	
10	Convert value from line 9 into degrees and minutes	71° 55'	
11	Ln of tan(result of line 10)		1.12
12	(my latitude in decimal degrees ÷ 2) + 45	70.35°	
13	Convert value from line 12 into degrees and minutes	70° 21'	
14	Ln of tan(result of line 13)		1.03
15	Subtract line 14 from line 11		0.09
16	(result of line 15) * 180		16.2
17	Divide value from line 8 by value in line 16		7.58
18	atan(value of line 17) = Az of course as ___ ° ___ ' ___		N82° 29' W
	<small>Use N if Dest. is N of Your DR Use E if Dest. is E of Your DR</small>		
18	Rhumb line course Zn		277° 31'
19	$60 * (\Delta L \text{ from line 5}) \div \cos(\text{Az from line 17}) = \text{rhumb line distance in nm}$		1,450 nm

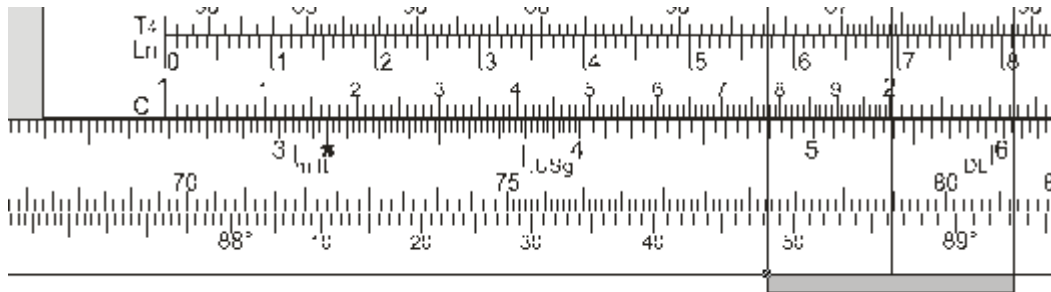
Steps 2 and 4: Conversion of degrees and minutes to decimal degrees. You don't need any more accuracy than to the nearest tenth of a minute. You can do this in your head. If you can't do it in your head, it is time to review the "times-tables" that you learned in 5th grade.³² Do not use your slide rule for rudimentary calculations like these. Learn to think in tenths of a 60-minute degree

Step 8: π is marked on your slide rule just above 3.14. Align the right index over π . Move the slide over the top of 39.17 on the C-scale. Read the answer off the D-scale.

³² I have a clear memory of being home from school with chicken pox and being set the task of memorizing the times-tables. If you are not already doing it, you need to easily visual 36 minutes of arc as 0.6°. 39 minutes of arc is .65°. 42 minutes of arc is .7°.



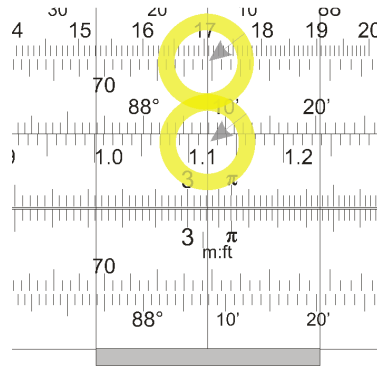
Step 9: Destination latitude, 53.9, divided by 2 looks like this. Read the answer on the D-scale below the left index.



Add the 27.92° you just got to 45° and you get 71.92°.

Step 10: You can convert 71.92 into degrees and minutes in your head as 71° 55'. If you feel the need, you can multiply $60 * 0.92$ using your slide rule and get the same answer.

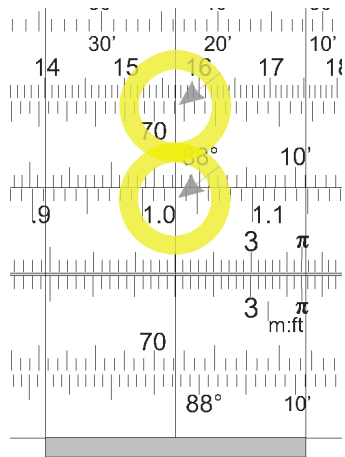
Step 11: Move the slide over the top of 71° 55' on the T3 scale and then move your eye down to the Ln scale to get the value for this step.



Steps 12 to 14: ...are performed using the same techniques as steps 9 to 11.

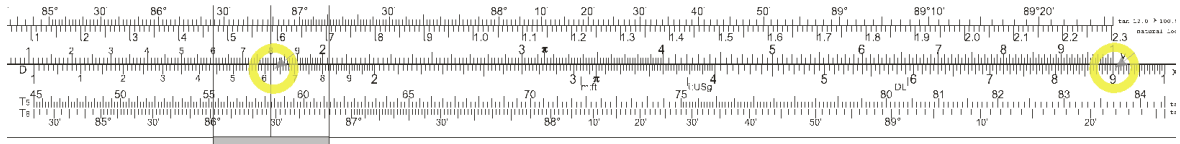
$$(\text{my latitude} \div 2) + 45 = (50.7^\circ \div 2) + 45^\circ = 25.35 + 45 = 70.35^\circ = 70^\circ 21'$$

$$\text{Ln of tan(result from step 13)} = 1.03$$

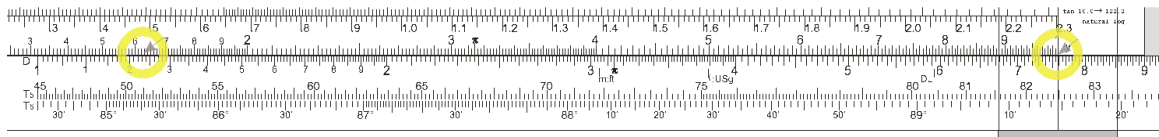


Step 15: Subtract line 14 from line 11 = 0.09.

Step 16: Multiply the result of step 15, 0.09, by 180 = 16.2.



Step 17: Divide the number from step 8 by the number from step 16, or $122.9 \div 16.2 = 7.58$.

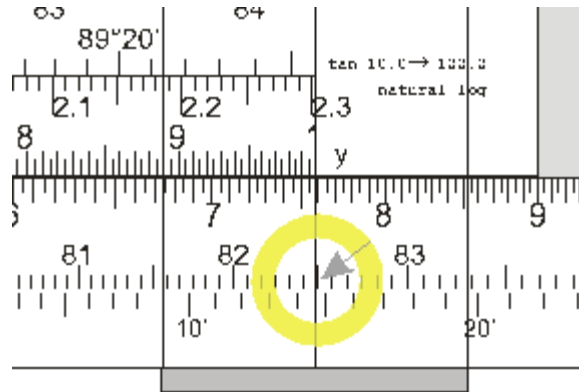


Step 18: Read the arctan of 7.58 on the T5 scale = N 82° 29' W.

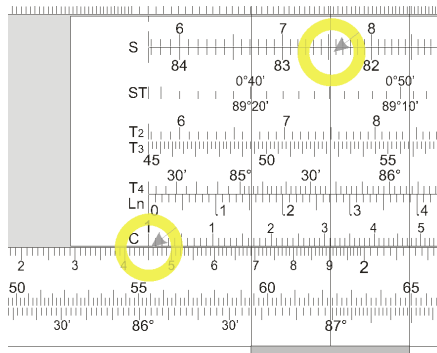
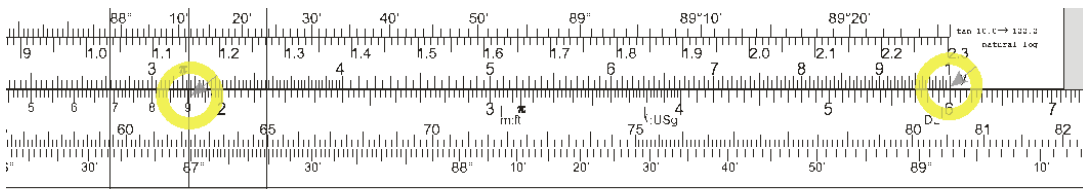
As in calculating great circles, the azimuth values you get are prefixed with N if the destination is north of you; prefixed with S if the destination is south of you. So also, the suffix is W if the destination is to your west and E if it is to your east.

To convert your azimuth Az (in some celestial navigation texts, it is notated as Z) into an azimuth angle Zn (a.k.a. the course you want to steer), start from the north if the prefix is north, i.e. start from 360° and subtract the number of degrees and minutes indicated. You know you are subtracting from 360° rather than adding because of the suffix W. That is, you are going to move 82° away from north in a westerly direction.

If you had an Az of S 82° E, then Zn would be 98°.



Step 19: $60(\Delta L) \div \cos(\text{RL course angle}) = 60(3.17) \div \cos(82^\circ 29') = 190.1 \div \cos(82^\circ 29')$
 $= 1,450 \text{ nm}$



If your SOG = 6.5 kn average = 156 miles per day, but beating into prevailing westerlies, your VMG would be closer to 78 nm per day. The difference between the rhumb line course from Port Hardy to Dutch Harbor at 1450 nm and the great circle at 1422 is 27 nm. This works out to a time savings of around 8 hours, all other things being equal. You are going to spend 18 days or so to travel this distance on a beat. If you want to navigate a great circle route, you will spend 4 or 5 minutes a day recalculating your optimal course for the sake of an 8 hour savings overall. You can decide if you would rather arrive in Dutch Harbor ASAP, at the cost of recalculating your route each day...or if you are willing to pay an 8 hour price in time and enjoy the simplicity of trying to make good a course of 82.5° and hold to it throughout.

The closer your ports are, the less sense it makes to go to the trouble of using a great circle route for vessel navigation.

However, if you were attempting to sail non-stop from Port Hardy to Tokyo non-stop, the rhumb line distance would be 4,126 nm and the great circle distance would be 3,898 nm.

The great circle route would save you 228 nm in overall distance to be covered. If you persisted in making 78 nm/day against prevailing westerlies, that would translate into arriving 3 full days sooner.

So the further apart your ports are, the more sense it makes to sail great circle routes.

Great circle calculations are useful both for course planning for your vessel, but also useful for doing sight reduction if you are sighting a celestial object with a declination outside the range that Pub. 249 vol 2 and 3 work with. Rhumb line calculations are only used in vessel navigation.

§44. *Tacking Downwind*

When your destination is almost directly downwind of you,³³ you notice that if you point a bit higher, you go faster. You know that you are sailing a little further, but your instinct is that by sailing faster, though a bit further, you will arrive at your destination more quickly than if you sailed the more direct course.

This instinct tells you that there is a relationship between *distance* travelled, *speed*, and *time*. And indeed, with years of experience, a skipper will learn the optimal downwind tacking angle to use for his boat in different wind and sea conditions. But Arvel³⁴ Gentry published an important article in 1970³⁵ in which he outlined the math that will allow you to sail downwind efficiently without waiting all those years. He gives, if you will, the math that supports your instincts.³⁶

Gentry, who died in 2015, published a number of articles over a period of years in which he brought his experience in aircraft design to bear on areas of interest to sailors.

As of 05 March 2016, you can download a number of these articles³⁷ from <http://arvelgentry.jimdo.com/> and <http://tinyurl.com/AG-Articles> .

Assume that the wind is coming from 205°. So if you are sailing at 25°, you are sailing dead downwind.

Assume the great circle route to your destination³⁸ is 35°. So then, if you are sailing 10° higher than dead downwind, you are precisely on course for your destination. But will you get there faster if you sail 20° higher, or even 30° higher than dead downwind?

³³ It is seldom *exactly* downwind. At the end of this section, I will explain how this math works to take care of this rare scenario as well.

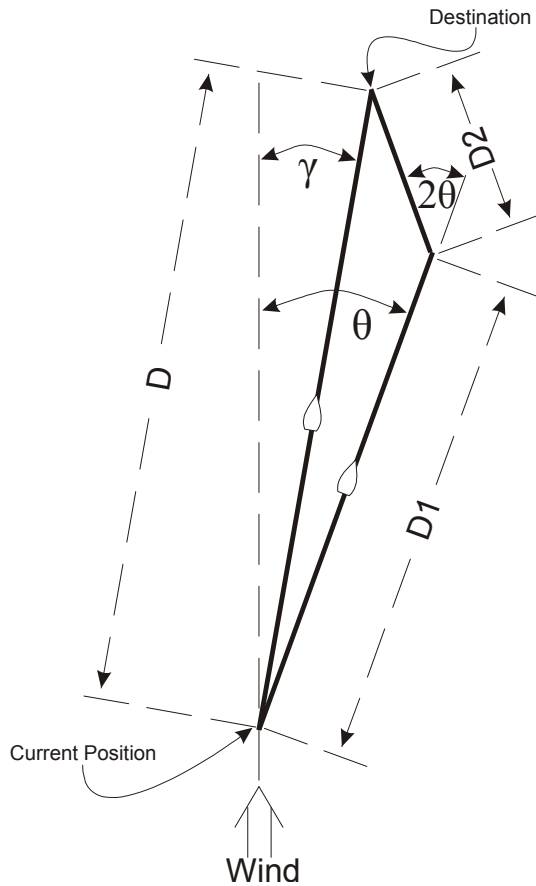
³⁴ ...an old Welsh name.

³⁵ He was, at the time, Chief of Applied Research at Douglas Aircraft. By 1986, he was head of Boeing's aerodynamics computing department, and in his spare time was helping to design a winged keel for one of the America's Cup challengers.

³⁶ <http://tinyurl.com/TackingDownwind> (retrieved 05 March 2016)

³⁷ ...with the blessing of his daughter, who is more interested in seeing her father's legacy carried on than in protecting copyrights. <http://tinyurl.com/KimGentry> (retrieved 05 March 2016)

³⁸ or the rhumb line course, if you are doing coastal sailing.



- γ = angle between line to destination and dead downwind direction
- θ = downwind tacking angle
- D = distance to mark without tacking
- $D\theta = D1 + D2$, i.e. distance to destination with downwind tacking (further than D but potentially faster to complete)
- 2θ = course to follow after gybe (= twice θ)
- S_γ = speed you make on direct course to destination, at angle γ to dead downwind
- S_θ = speed you make on course θ , pointing higher from dead downwind than γ

Stating the question more generally, you know γ . You want to know the optimum angle for θ which will get you to your destination the very fastest. You don't care if $D\theta$ is further than D . You care about getting home quick.

The complication in this is that the optimum answer will be different for different hull shapes and sail combinations, and also for different sea states and wind speeds. So then, you must begin by observing the actual speed you make while following different courses. That is to say, it will take several minutes to collect the data before you can calculate your optimum course.

Then, you need a "distance factor" (DF) and a "speed factor" (SF) that you can relate a "time factor" (TF). These are:

$$DF = \frac{\cos(\gamma)}{\cos(\theta)} \qquad SF = \frac{S_\theta}{S_\gamma} \qquad TF = \frac{DF}{SF}$$

The time factor represents the fraction of time it will take to sail on the given course θ compared to the baseline time it will take to sail on course γ . If the TF = 0.750, then it means that sailing course θ will take 75% of the time it would take if you sailed on course γ . Another way of saying it is that course θ is 25% faster under these conditions.

Example with a TEOG 40 foot sloop, where γ is 10° higher than dead downwind.

That is, if the wind is coming from due south, 180°, dead downwind would be 0°. Pointing 10° closer to the wind than 0° would be sailing at 10° (or giving equal answers, sailing at 350° - but we are not interested in true bearings; only bearings relative to dead downwind).

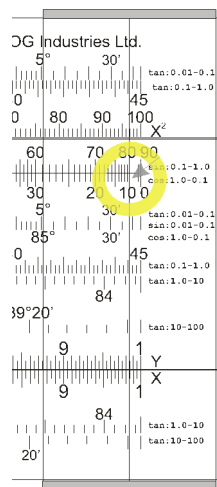
Conditions: 4 knot wind; small waves with glassy crests; no breaking waves.

Course to Dest. relative to dead downwind γ	Course sailed relative to dead downwind θ	Distance Factor DF $\frac{\cos(\gamma)}{\cos(\theta)}$	Speed on course θ $S\theta$ (i.e. $S\gamma$)	Speed Factor SF $\frac{S\theta}{S\gamma}$	Time Factor TF $\frac{DF}{SF}$	Ideal Course
10	10	1.000	2.0	1.000	1.000	
	20	1.048	2.3	1.150	0.911	
	30	1.137	2.9	1.450	0.784	
	40	1.286	3.4	1.700	0.756	★
	50	1.532	3.8	1.900	0.806	

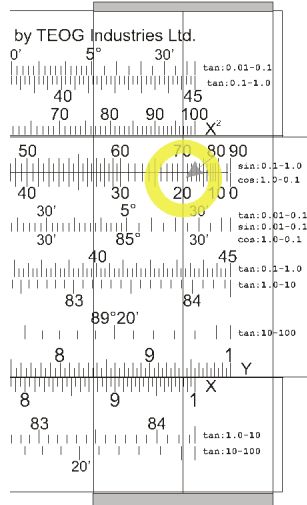
Let's unpack this. If you are sailing directly at your destination, pointing 10° higher than dead downwind, your speed is 2.2 knots. Of course, at that angle $\cos(\gamma)/\cos(\theta) = \cos(10^\circ)/\cos(10^\circ) = 1$. You will find that your speed factor and time factor are both 1. This is your baseline result. You want to see if you can do better than this.

The DF for 20° is $\cos(10^\circ) \div \cos(20^\circ) = 1.048$

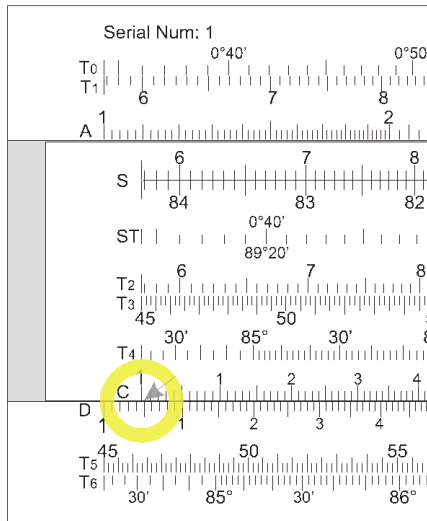
Position your cursor over $\cos(10^\circ)$.



Now move the hash mark for $\cos(20^\circ)$ underneath the cursor, to do a division.



Read the answer on the D scale, under the left index on the C scale.



Do this for the other values of θ you want to check: 30° , 40° , and 50° .

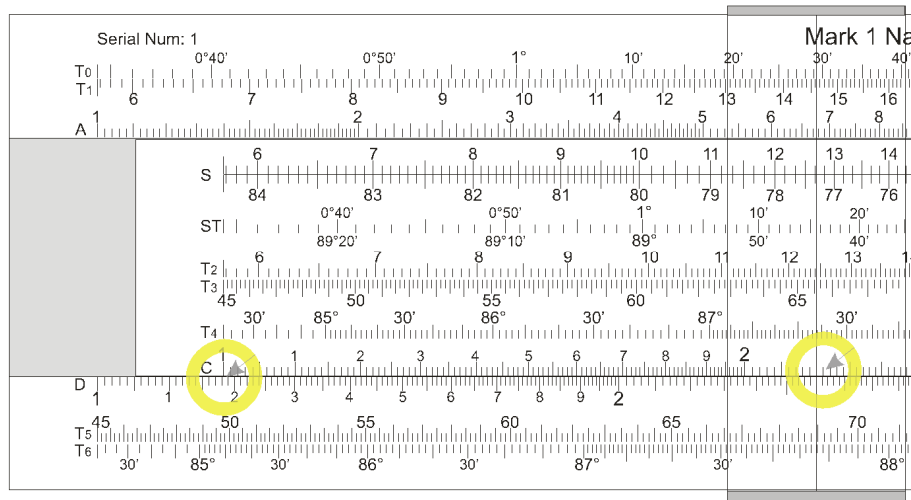
Now, settle your craft in for a few minutes on each course, starting at 10° (i.e. γ , pointing directly at your destination), 20° , 30° , 40° , and 50° . You will be using the masthead wind vane and your instruments to ensure that you are on the proper course. In each case, allow a few minutes to pass for your speed to settle down. In 4 knots of wind, your speeds should be quite consistent.

As you move into higher winds, and bigger waves, your speed will vary more from moment to moment.³⁹ Do your best to get an average speed to the nearest tenth of a knot.

Now that you have the first four columns of your chart for 4 knots of wind filled in, you can calculate SF. This is a straightforward division. When $\theta = 20^\circ$ and your speed is 2.6 kn,

³⁹ You will slow down as a big wave smashes into your bow.


then SF = 2.6 kn/2.2 kn. Position 2.2 on C over 2.6 on D, and read the answer on D under the left index of C = 1.182.



Carry this on to calculate the speed factor values for the other course values you want to evaluate.

Now, fill in the time factor column, where $TF = DF/SF$. When $\theta = 20^\circ$, this is $1.048/1.182 = 0.887$.

Position the cursor on 1.048 on the D scale, and position 1.182 on the C scale under the cursor, and read the answer under the right index of the C scale.



The smaller the time factor value, the quicker you will arrive at your destination. In this case, sailing 40° higher than dead downwind will get you to your destination in 74.5% the time it would take you if you sailed directly for your destination.

You should understand how to work the slide rule on this problem, but you may be struggling to wrap your head around this whole concept of calculating tacking downwind angles. It may help to use this same TEOG 40 example at some different wind speeds.

Conditions: 8 knot wind; scattered whitecaps.

Course to Dest. relative to dead downwind γ	Course sailed relative to dead downwind θ	Distance Factor DF $\frac{\cos(\gamma)}{\cos(\theta)}$	Speed on course θ $S\theta$	Speed Factor SF $\frac{S\theta}{S\gamma}$	Time Factor TF $\frac{DF}{SF}$	Ideal Course
10	10	1.000	4.3 (i.e. $S\gamma$)	1.000	1.000	
	20	1.048	5.3	1.233	0.850	
	30	1.137	6.0	1.395	0.815	★
	40	1.286	6.7	1.558	0.825	
	50	1.532	7.0	1.628	0.941	

Conditions: 12 knot wind; numerous whitecaps.

Course to Dest. relative to dead downwind γ	Course sailed relative to dead downwind θ	Distance Factor DF $\frac{\cos(\gamma)}{\cos(\theta)}$	Speed on course θ $S\theta$	Speed Factor SF $\frac{S\theta}{S\gamma}$	Time Factor TF $\frac{DF}{SF}$	Ideal Course
10	10	1.000	6.3 (i.e. $S\gamma$)	1.000	1.000	
	20	1.048	7.3	1.233	0.904	★
	30	1.137	7.8	1.395	0.918	
	40	1.286	8.2	1.558	0.988	
	50	1.532	8.2	1.628	1.077	

Conditions: 16 knot wind; 7 foot waves, ubiquitous whitecaps, some spray.

Course to Dest. relative to dead downwind γ	Course sailed relative to dead downwind θ	Distance Factor DF $\frac{\cos(\gamma)}{\cos(\theta)}$	Speed on course θ $S\theta$	Speed Factor SF $\frac{S\theta}{S\gamma}$	Time Factor TF $\frac{DF}{SF}$	Ideal Course
10	10	1.000	7.9 (i.e. $S\gamma$)	1.000	1.000	★
	20	1.048	8.0	1.013	1.035	
	30	1.137	8.2	1.038	1.096	
	40	1.286	8.2	1.038	1.239	
	50	1.532	8.2	1.038	1.476	

What you are observing here is that when winds are light, and you are nowhere near your maximum hull speed, pointing higher than your rhumb-line course by 30° or 40° could be a good idea.

But as your boatspeed goes up, progressively closer and closer to your maximum hullspeed, then your ideal course moves closer to pointing directly at your destination. With this particular TEOG 40, once the wind gets to 16 knots, going faster through the water really isn't an option. 8.2 knots is as fast as you are going to go.⁴⁰ Your best plan is to point directly at your destination.

Conditions: 24 knot wind; 12 foot waves, the boat is surfing with speeds up to 12 knots.

All these equations go right out the window when you start to surf. Hang onto your hat and have fun!

Use the same equations on those occasions when your destination is dead downwind. Just use $\gamma = 0^\circ$, and work the rest of your table as normal.

Inshore racing sailors would do well to start a notebook and gather data for a wide range of wind speeds and sea conditions, the better to know how their boat and sails perform.

§45. *Compass Delta*

Creating a compass deviation card for a vessel is something everybody talks about but almost nobody does.⁴¹ Let us suppose that you are among this majority who has never measured your deviation, and that while you are sailing from Dutch Harbor to Tokyo, you decide it is a good time to begin creating a deviation card for yourself.⁴²

⁴⁰ If you think that this is not quite up to what the equation for maximum hull speed would suggest, you need to recall that the hull speed equation deals in LWL (length at water line) and not LOA (length over all). The TEOG 40 has a LOA of 40 feet. Its LWL is shorter.

⁴¹ In 2016, I finally saw my very first actual compass deviation card, on a small aircraft that I rode in from Vancouver to Maple Bay, BC. Apparently, making such a card is a federal requirement for this type of aircraft.



⁴² You don't need to collect all your data at once. Also note that there may be a heeling error, as the relative positions of the engine and compass change. Compass deviation issues can lead you

The only true and utterly reliable way⁴³ to determine the magnetic delta (variation + deviation) of your steering compass,⁴⁴ at your current location and on your current course, is by comparing your compass reading to the azimuth to a celestial object. You can use your Nautical Almanac plus Pub. 249 to determine the azimuth of any of these “lighthouses in the sky”, of course. But there is an easier, quicker way.

You already know that taking a meridian sight at local noon gives you a reliable measure of your latitude. Part of what makes this method useful is that although the sun is moving quickly from east to west at noon, its altitude is changing very slowly indeed. So you can get a very reliable sextant altitude.

By the same token, near sunrise or sunset, the sun’s altitude is changing very rapidly, but its azimuth change from east to west is very slow. So you can get a very reliable read on your compass.

When the center of the sun is on the celestial horizon – which, due to refraction is when the lower limb of the sun is 2/3 of its diameter above the visible horizon⁴⁵ – you can calculate the azimuth with the equation:

$$\text{Sin(Azimuth)} = \sin(\text{declination}) \div \cos(\text{latitude})$$

You don’t need to include anything in this equation about the altitude of the sun, or any sort of corrections. If the center of the sun is on the celestial horizon, you have already eliminated the effect of refraction. Hence the true altitude at that moment = 0°.

With the azimuth from this equation, turn your sextant on its side to measure the angle from the center of the sun to the bow (or center of the stern) of the boat, and determine the delta (i.e. the difference) between your steering compass and true bearings. Make this a part of your morning/evening routine, along with taking sextant observations during nautical twilight and you can dial in your compass delta to a fare-thee-well. Once you get back home, you can turn this data into a proper deviation card.

To make this work, you need your own latitude. You also need, from the Nautical Almanac, the declination of the sun.

into the deep end of the pool, so to speak. But keep in mind that if you had no deviation card whatsoever last week, what you are doing today is a genuine improvement, even if it is not perfect.

⁴³ <http://www.pbo.co.uk/expert-advice/how-to-swing-a-compass-17845> gives a method that assumes your hand-bearing compass is unaffected by any deviation. This constitutes an interesting little leap of faith.

⁴⁴ I spent a couple of weeks on a vessel that had two conventional compasses in the cockpit, plus a digital compass. No two of these compasses agreed with each other, and no single compass agreed with the GPS. The maximum differences between reported headings amounted to 35° on certain courses.

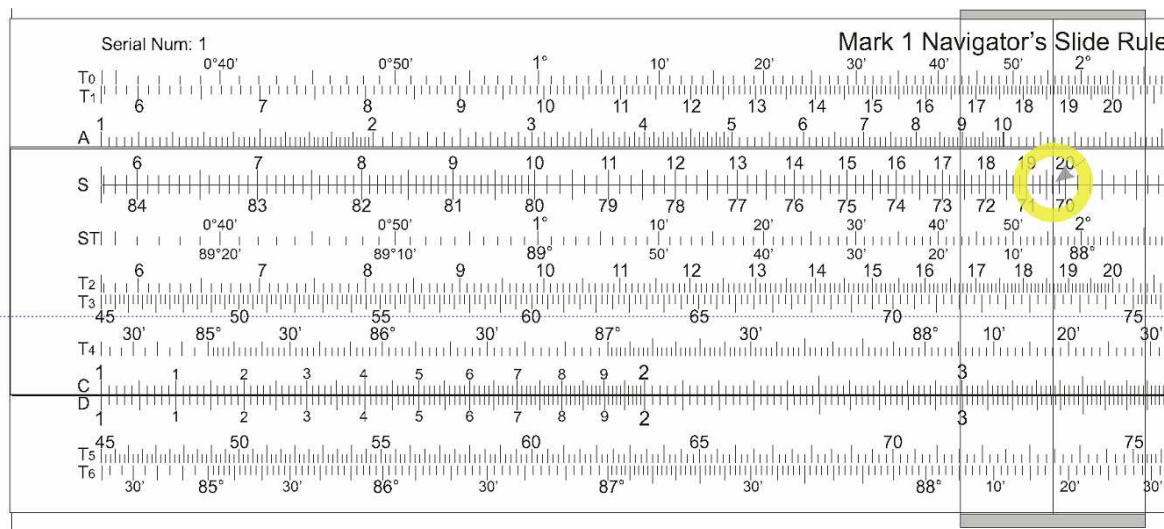
GPS is of some value in determining compass deviation, of course. But if we are sailing on salt water, then most of us, most of the time, are sailing across a current of not-precisely-known direction and not-precisely-known speed. GPS tells you how the boat is moving without regard for which way the bow is pointing. To really dial in your compass deviation, there is no substitute for a celestial object.

⁴⁵ Bowditch (2002). p. 273.

For example: The DR position of your vessel is 51° 24.6' N, 179° 00.0' E. Your steering compass indicates your course as being 252°. The declination of the sun is 19° 40.4' N. You want the azimuth of the sun.

Rules: All values are treated as positive, whether or not latitude and declination are of contrary name. The azimuth is given the prefix of E if the sun is rising; W if it is setting. It is given the suffix N if the declination is north; S if the declination is south.

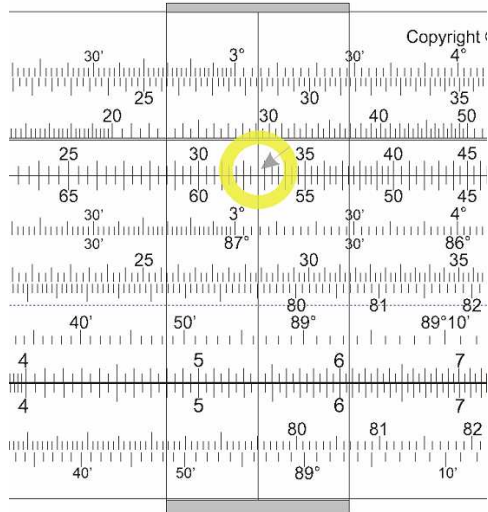
Center the slide, then position the cursor over the top of $\sin(19^\circ 40')$.



Position $\cos(51^\circ 25')$ beneath the cursor to divide.



Position the cursor over the top of the right index, which yields the answer to this problem in division, then center the slide. Read the azimuth of the sun on the top of the S scale: W 32° 40' N.



Azimuth = W 32° 40' N, which is the same as...

Azimuth = 270° + 32° 40', which is the same as...

Azimuth = 302° 40'...which we will round to 303°⁴⁶

If you had a compass delta of 0° then the bearing difference from the center of the sun to your bow (which is on course 252°) would be 303° - 252° = 51°.

But when you use your sextant to measure from the bow to the center of the sun, you get an angle of 53°. That is to say, your compass delta is 2° west. Write this down in your log, together with the DR position of your vessel.

Then once you get back on dry land, go to this web address:

<http://www.ngdc.noaa.gov/geomag-web/>

...enter your DR position of 51° 24.6' N, 179° 00.0' E, and you will discover that at that location on the face of the earth, the magnetic variation is 3.05° east⁴⁷ which we will round to 3° east.

Compass Δ: 2° west

Variation: 3° east

Deviation: 5° west

⁴⁶ Typically, you cannot read a binnacle compass with any more accuracy than ± 1° of so. Hence, you will round your numbers to the nearest degree. If your steering compass' design is such that you can read it only to the nearest 5°, then just do the best you can.

⁴⁷ On both US and Canadian government websites, the scientists that calculate earth magnetism talk in terms of "magnetic declination". The hydrographic offices that publish nautical charts describe the same phenomenon as "magnetic variation."

Go through this same process as your vessel is on different magnetic courses over the course of your cruise, and you will eventually build up the data for a useful deviation card. See <http://www.cockpitcards.co.uk/page15.htm>.

While using the sun is the classic way to determine the magnetic variation at your DR, you can also use the moon: measure with your sextant from the moon to the bow of the boat when the *upper* limb of the moon is just touching the visible horizon.

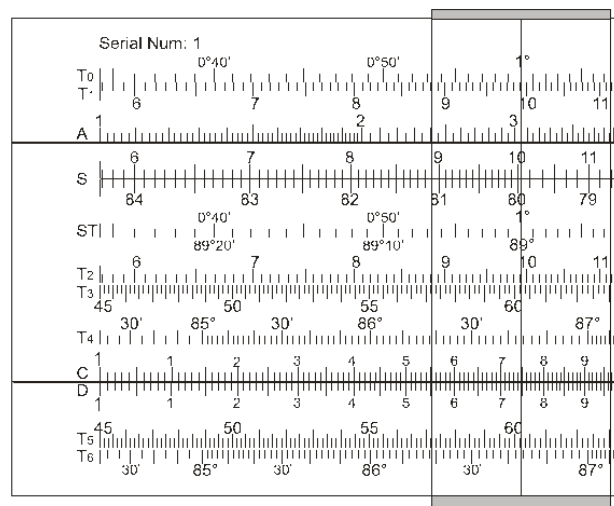
If you wish to use a star or planet to check your magnetic variation, then do your sextant observation when the object is just a little bit more than one sun diameter above the visible horizon.

Looking back over what we have done, once we knew the magnetic variation, we knew everything but the declination. Once we have worked out a full declination card, we can of course then solve for the variation wherever we are in the earth.

§46. Trigonometry and Mental Math

Generally, when using a slide rule, you do some quick-and-dirty calculation to come up with the general scope of the solution to your problem. This lets you know where to put the decimal place.

But if you have no idea the scope of an answer, you have a problem. After all, if your slide is in this position:



...then when the answer is a tangent value, it could be:

- 1° 00' from the T₀ scale
- 9° 56' from the T₁ scale
- 60° 12' from the T₅ scale, or...
- 86° 42' from the T₆ scale.

As you are aware, the Mark 2 lets you work with trigonometric values quickly and directly, without needing to concern yourself with the numeric values into which they translate. But if you get confused about the scope of your answer, then a bit more understanding will be helpful.

Sine

Using the ST scale from 0° 34' to 5° 44' = sine values from 0.01 to 0.1.

Using the S scale from 5° 44' to 90° 00' = sine values from 0.1 to 1.

Cosine

Using the S scale from 0° 00' to 84° 16' = cosine values from 1 to 0.1.

Using the ST scale from 84° 16' to 89° 26' = cosine values from 0.1 to 0.01.

Tangent

Using the T₀/ST scales⁴⁸ from 0° 34' to 5° 44' = tangent values from 0.01 to 0.1⁴⁹

Using the T₁/T₂ scales⁵⁰ from 5° 44' to 45° 00' = tangent values from 0.1 to 1

Using the T₃/T₅ scales from 45° 00' to 84° 17' = tangent values from 1 to 10

Using the T₄/T₆ scales from 84° 17' to 89° 26' = tangent values from 10 to 100

Putting It All Together

If you see an equation that is:

$$\sin(32^\circ) \times \cos(70^\circ) = \tan(\theta)$$

...and you simply have no foggy clue as to even the general value that θ represents, then restate the equation in terms of the trig values.

⁴⁸ The top half values of the ST scale are identical to the T₀ scale values. I could have as easily named T₀ as ST₀ or some other similar designation.

However named, the scale needed to be up on the body to facilitate easy calculation of great circle routes.

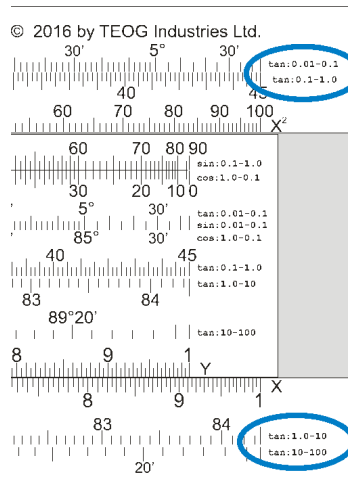
⁴⁹ Within the limits of slide rule accuracy, sine and tangent values are identical for any angles less than 5° 44'.

⁵⁰ Because this ruler has been optimized to make the Bygrave equations for sight reduction and great circle calculations easy and quick, all of the possible tangent scales appear both on the slide and on the body.

$\sin(32^\circ) \times \cos(70^\circ)$ is an equivalent equation to 0.530×0.342 .

So you work out in your head that $0.530 \cong \frac{1}{2}$. You figure that $\frac{1}{2}$ of 0.34 is 0.17. You know that all tangent values from 0.1 to 1 lie along the T₂/T₅ scales. So if $\tan(\theta)$ is your answer, and it is close to 0.17, then θ will be $10^\circ 16'$.

As a memory aid, the range of each trig scale is documented on the rule at the right edge of the scale.



Visual Methods

§47. *Calculating Intermediate Tide Heights*

It is possible to make surprisingly accurate tide predictions using the scale of inches on the backside of the Mark 2 Navigator's Slide Rule, a pencil, and a piece of paper.

Even a quick-and-dirty graph may be sufficient⁵¹ to calculate how much anchor rode you need to veer in order to sleep soundly that night.

Step 1: From the tide book, note the times and heights of the low and high tides during the time period that concerns you.

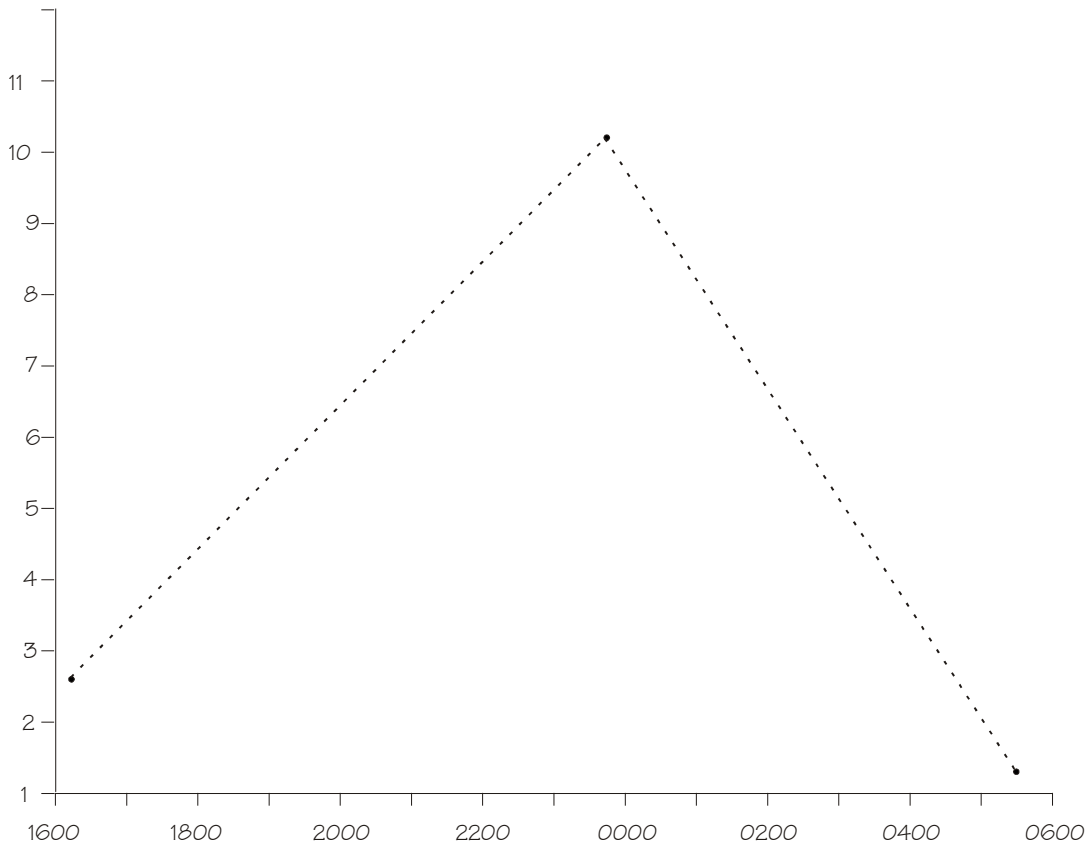
⁵¹ When I lived in Japan, I owned a 13' dinghy that I stored on a hand-trailer. You can see a configuration similar to what I had about half way down the page at <http://tinyurl.com/gmfzfl2>. The boat ramp I used was concrete, and had a drop off at the end of it. As long as the tide was above a certain level, I could launch and retrieve my boat easily. If it was below that level, it was impossible to haul the steel trailer up, together with 280 lb. of boat on it, over the end of the concrete ramp. In that case, I would have to wait for the tide to go to its minimum, then come back up before I could retrieve my boat.

The local authority published tide tables in a little book that would fit in your hip pocket. I took to carrying a log book that was also small enough to fit in my hip pocket. Using the tide chart booklet itself as a straight edge, I became good enough at creating a graph of intermediate tide heights in my log book that I could predict the critical tide height for dinghy retrieval to within 5 or 10 minutes.

Step 2: Build a graph that is of a proper scale to capture these heights and times.

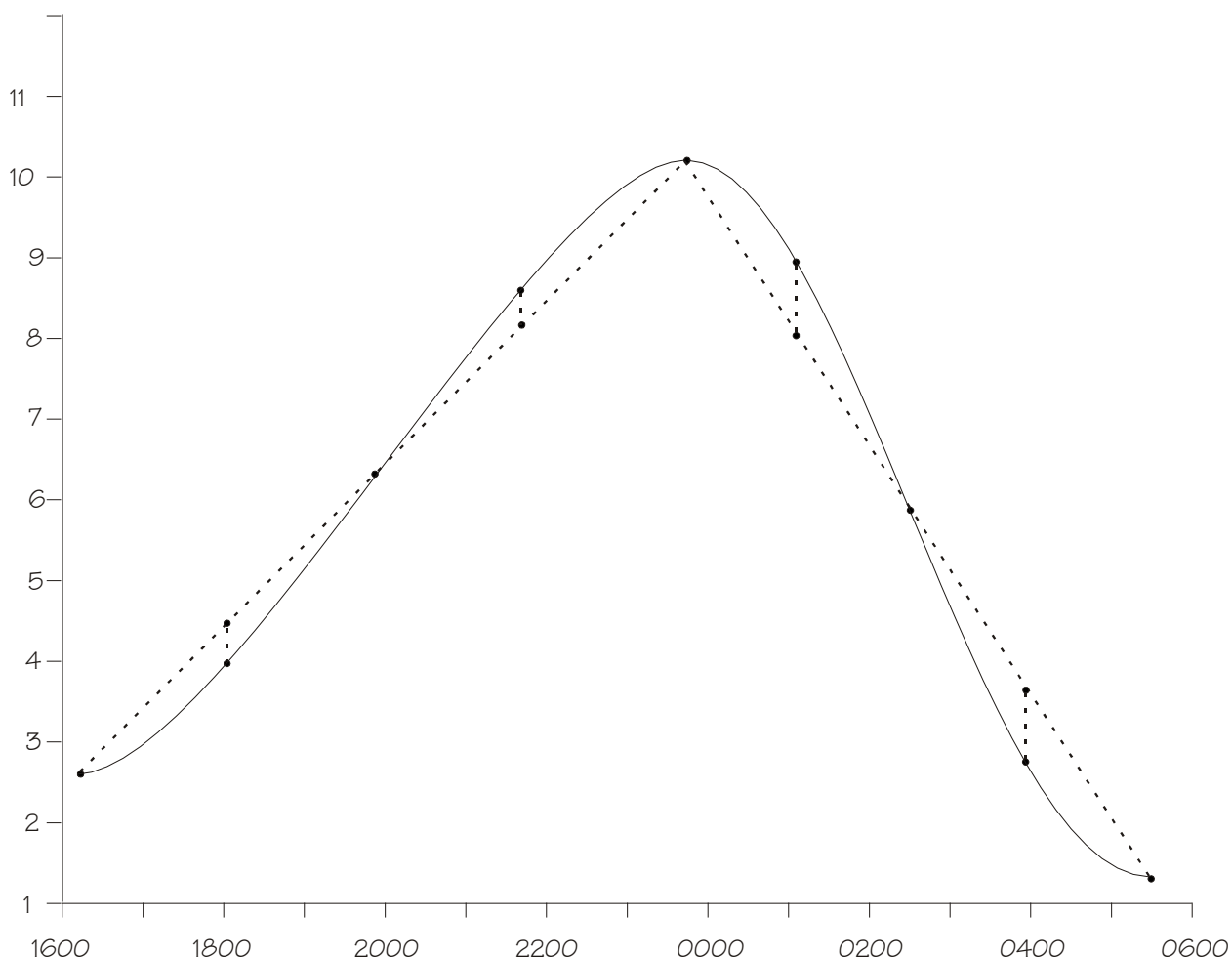
For instance, assume there was a low tide of 2.6 feet at 1615, and it is 1800 as you are cruising into your anchorage. You want to find a spot to anchor, and veer enough rode that you will neither touch bottom during the night, nor drag anchor. High tide will be 10.2 feet at 2345, followed by a low tide of 1.3 feet at 0530.

Here is what your basic graph looks like.



Step 3: Mark the lines at the half and quarter distances. Notice that the scale of inches on your Mark 2 is in tenths of an inch rather than quarters/eighths/etc. This will make it a bit easier for you to figure out the length of a quarter line. For instance, if you figure your line is 5.35" long, you can do division with your slide rule to sort out that $\frac{1}{4}$ of that is 1.34".

Step 5: Assuming your tide follows a sine curve (a pretty safe bet, most of the time, in a region with two high tides per day), you can draw a smooth curve connecting dots and get a pretty close picture of what your tide looks like.



From this graph, you can figure out what the tidal height is at the moment you drop anchor; what it will be a maximum tide tonight, and what the low tide will be in the morning. If you anchor in a place where you need at least 2 feet of tide above the chart datum to avoid touching bottom, you know that you will need to up-anchor by 0400, or 0415 at the latest.

§48. *Plotting Longitude*

The conventional way to determine longitude on a VP-OS Universal Plotting Sheet is to use a set of dividers together with the scale in the lower right corner of the page.⁵²

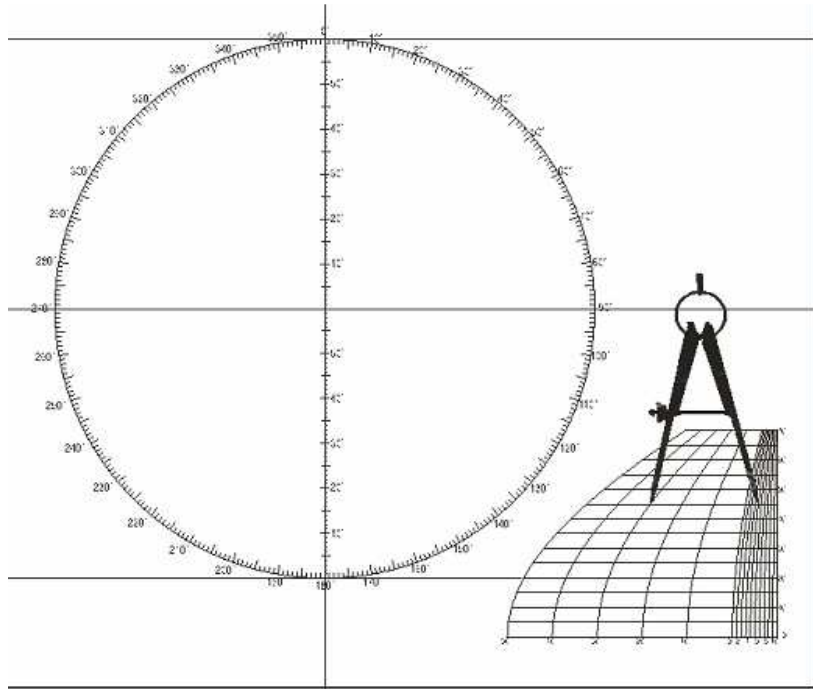


Figure 3.1

This is still a good method, and if you are comfortable with it, the by all means carry on. However, it is possible you may find it quicker to calculate longitudes using the scale of minutes on the Mark 2 Navigator's Slide Rule.

As you might imagine, there is a fixed, mathematical relationship between latitude and the width of a degree of longitude:

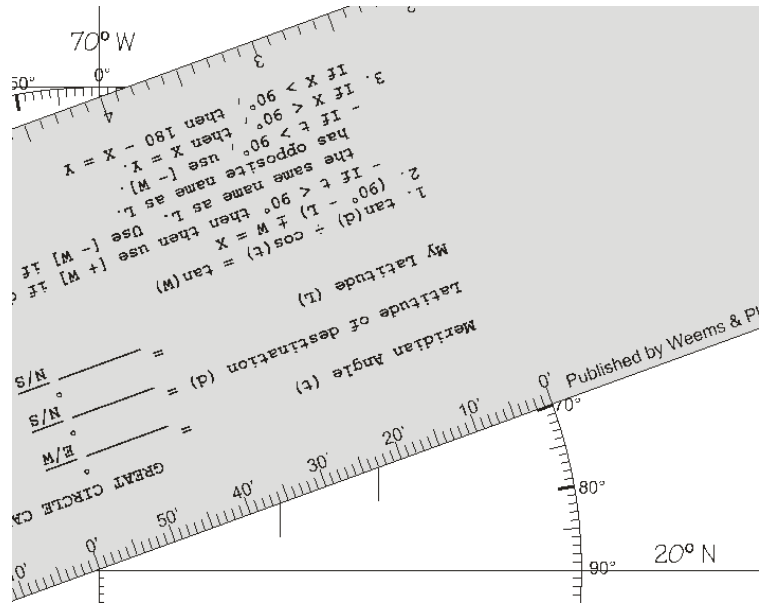
$$\text{Width of degree of longitude in nautical miles} = \cos(\text{latitude}) \times 60.$$

This can be calculated graphically by using the scale of minutes on the backside of the Mark 2 Navigator's Slide Rule. Rotate it so its offset from horizontal is equal to your latitude.

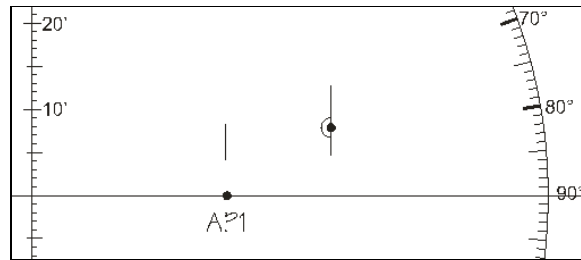
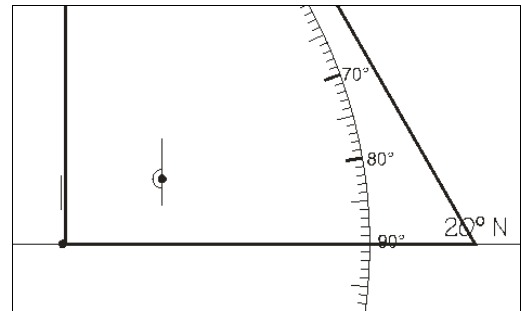
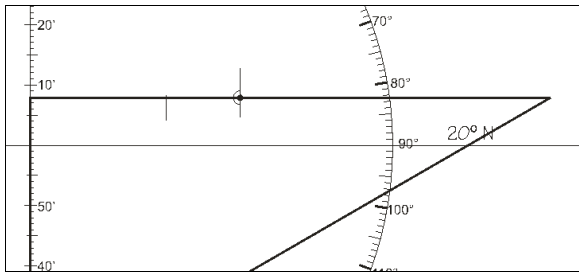
Construct a plotting sheet for North 20°, West 70°. Let's assume that your DR is North 20° 08', West 69° 23', and your AP is North 20° 00', West 69° 34'.

Center the scale on the Mark 2 at the center point of the plotting sheet, then rotate the rule by 20°. Make a mark next to the 23' point on the Mark 2, for your DR, and another at the 34' point, for your AP.

⁵² This discussion assumes that you are using a VP-OS sheet published by Weems and Plath, or one that uses precisely the same scale.

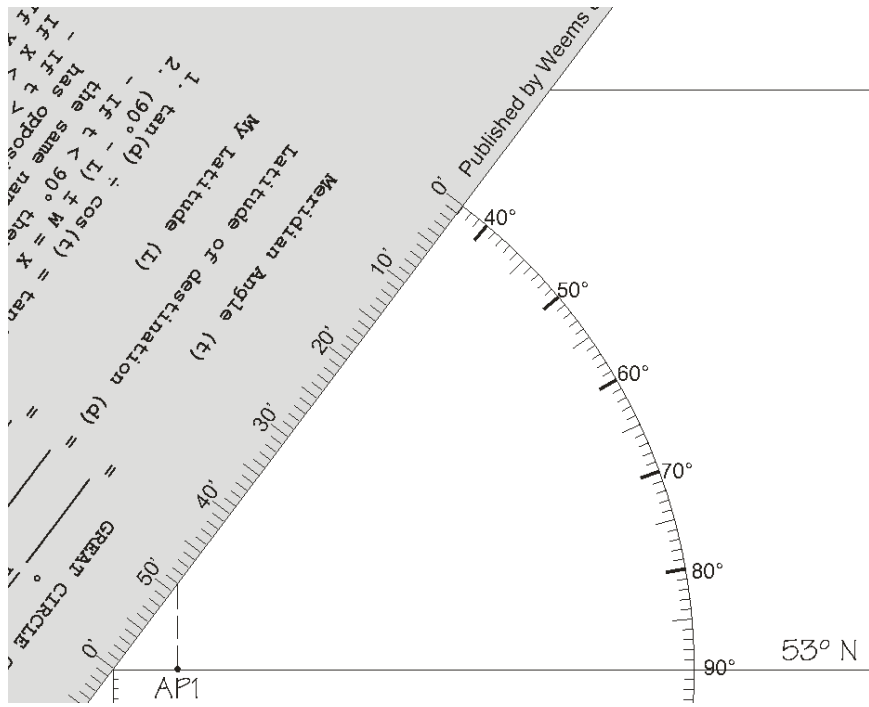


Use your triangle to sort out your latitude, and position a mark for your DR. Use the triangle to extend your mark at 34' down to 20° for your AP.



Now, to fix this concept in your head, let's do another problem. Assume your AP is at North 53° 00', West 145° 49'. Rotate the ruler from horizontal by 53°. ⁵³ Draw a line down from 49' on the Mark 2 rule.

⁵³ Be careful to note this does not mean rotating the ruler until it lines up with 53° on the compass rose, but 53° away from horizontal.



INDEX

A	
Abbreviations.....	1
Al- Oughtrêd	26
B	
Bygrave	45
C	
Can You Learn to Navigate From This Manual?	11
Chart Scales & Distance	3, 25
Compass Delta	9, 76
Conversions	3
Converting Liters to Gallons.....	18
Converting Meters to Feet.....	20
Current Triangle.....	3, 15
D	
Dip.....	5, 34
Dip for Short Horizon	5
Distance by Vertical Angle of Object Beyond the Horizon.9, 34	
Distance Off by Two Bearings and the Run Between....	5, 39
Distance to Radar Horizon	5
Distance to Visible Horizon	4, 31
Divide	27
Dutch Log.....	3, 21
F	
Fuel Consumption.....	4, 29
G	
Great Circle Route.....	6, 45
H	
Hull Speed	38
I	
Intermediate Tide Heights.....	4
M	
Maximum Hull Speed	4, 38
Multiply	22
N	
Navigational Triangle.....	6, 45
P	
Parts of the Slide Rule	11
Plotting Longitude	9, 86
R	
Reading the C & D scales	12
Rhumb Line	8, 64
S	
Scope of a Universal Plotting Sheet.....	6, 43
Sight Reduction	6, 45
Speed, Time and Distance	3, 13
T	
Tacking Downwind	4, 70
Tide Heights.....	82
Trig Scales.....	15
Trigonometry and Mental Math.....	10, 52, 80

BIBLIOGRAPHY

Bowditch, Nathaniel, et al, *The American Practical Navigator* (Bethesda: National Imagery and Mapping Agency, US Government), 2002.⁵⁴

Doane, Charles, *Crunching Numbers: Hull Speed & Boat Length*, <http://tinyurl.com/jxynsw6> (retrieved 11 March 2016)

Cutler, Thomas Jay, *Dutton's Nautical Navigation*, (Annapolis: Naval Institute Press), 15th ed. 2004.

Husick, Charles B., *Chapman Piloting & Seamanship* (New York: Hearst Books), 67th ed. 2009.

Gentry, Arvel, "Downwind Tacking", *SEA and Pacific Motor Boat*, February, 1970. (Retrieved 01 March 2016 from <http://arvelgentry.jimdo.com/>).

Martenhoff, Jim, "No Frills Navigation", *Boating*, December, 1978.⁵⁵

NavList: A Community Devoted to the Preservation and Practice of Celestial Navigation and Other Methods of Traditional Position-Finding (<http://fer3.com/arc>).⁵⁶

Podmore, J.C., *The Slide Rule for Sea and Air Navigation* (Glassgow: Brown, Son & Ferguson, Limited), 3rd ed.1974.

Rousmaniere, John, *The Annapolis Book of Seamanship* (New York: Simon and Schuster), 1989.

⁵⁴ Bowditch first published his handbook of navigation in 1802. It was updated and republished several times in his lifetime, and later by his son. In 1867, the copyright and plates were purchased by the Hydrographic Office of the US Navy. It has been published, through more than 75 editions, by the US government ever since. This work is the gold standard of navigational mathematics adopted for this manual. So for instance, when Bowditch makes the jump to metric units (meters instead of feet; cm instead of inches), this user manual will also make the jump to metric.

⁵⁵ I am obliged to Bill Anderson of Crofton, British Columbia, for bringing this article to my attention.

⁵⁶ For anybody interested in traditional navigation, this is an enormously important resource. Do a search from there on "Bygrave" and you can review an extensive discussion – spanning many years – on different mathematical approaches to solving the navigational triangle. You can even access a statistical analysis of the accuracy of Bygrave's cosine/tangent equations compared to the more-conventional cosine/sine equations, as solved using a 10" straight slide rule.

Members of this group have used PVC tubing to construct their own cylindrical slide rules, similar to the original Bygrave, and there are hundreds of postings related to Amelia Earhart's 1937 navigation across the Pacific Ocean. Further, this is really the ONLY place where you can dialog with people who, after they have gone to see *The Martian* (2015) with Matt Damon, muse aloud about the technical requirements for performing celestial navigation on Mars.

It was this group's discussion of the Bygrave formulas, in fact, that helped to determine which equations would be used in this volume for the solution of great circles/sight reduction. This in turn shaped the design of the Mark 2 Navigator's Slide Rule, as it was optimized to solve these particular equations.

ABOUT THE AUTHOR

Bill Gates and Bob Goethe are only two years apart in age, but the similarities stop there. Bill built Microsoft, a company everybody has heard of. Bob built TEOG, a company nobody has heard of. In the 1980s, when WordPerfect was the king of the hill in productivity software, Bill was selling MS Word...a program that was far ahead of its time. Bob has brought out the Mark 2 slide rule forty years after the electronic calculator wiped out the entire slide rule market.⁵⁷

It is this difference in entrepreneurial acumen that goes a long way in explaining why Bill can write a personal check for \$30 billion, while Bob can afford to order in pizza on Monday nights.

Still, Bob says, creating a specialty slide rule is like painting landscapes in oil. The person who does so paints not because it will make him any money.⁵⁸ And his paintings are never as quickly or accurately rendered as a single snapshot taken with his iPhone.

No...a person paints landscapes because there is something in it that nourishes his inner man.

At the bottom, there is an esthetic appeal to mathematics, engineering, and navigation that is every bit as real as the esthetic appeal of painting a landscape or creating a sculpture in marble.

Bob is the kind of person who, during an Alberta January blizzard, sits and looks out his living room window, pondering⁵⁹ how on earth pilots and sailors navigated across oceans back in 1931.⁶⁰



⁵⁷ Keuffel and Esser Co. presented the final slide rule they manufactured to the Smithsonian Institute in 1976. The Mark 2 you hold in your hands is one of only a handful of slide rules manufactured over the last 40 years.

The learning curve for using a slide rule was always steep, and it could manage only 3 or 4 significant digits in its answer. The electronic calculator was superior in so many ways.

You may have already realized, however, that while calculators are accurate to at least 8 significant digits, the last 5 of those digits often make little or no practical difference in navigation. The Empire State Building, the Golden Gate Bridge, and the Saturn 5 rocket that put men on the moon were all built with just 3 significant digits.

⁵⁸ Quite the contrary. If he really wanted to make money with a brush in hand, his best bet would be to offer to redo the siding of his local tattoo parlor.

⁵⁹ Playing with a slide rule on Sunday afternoon is about as practical/useful as watching football on TV, which Bob also enjoys. We do the one for the same reason we do the other – for fun.

⁶⁰ https://en.wikipedia.org/wiki/Francis_Chichester#Air_pilot The mathematics for sight reduction/great circle calculation presented in this manual are fundamentally the same as what Chichester used. He, however, used a cylindrical slide rule, which has an even more arcane role in navigational history than the straight slide rule.



He is a computer programmer by trade, but in his personal life is a bit of a Luddite, liking sails and wind more than diesel fuel,⁶¹ and sextants more than GPS devices.

That said, when sailing offshore he has enjoyed not only using his sextant and slide rule, but a navigation station that employs Expedition software to tie together the GPS, AIS, radar, HF radio, weather-fax, downloads of GRIB weather files, and polars for his vessel to calculate, hour-by-hour, optimum courses to sail over the next 36 hours.

⁶¹ "An outstanding day of sailing is one where you can leave dock in the morning and finish at another anchorage that night without once turning on your engine."